

Name : _____

Multiplying Decimals by Whole Numbers

Tenths: L2S2

A) Find the product.

$$\begin{array}{r} 1) \quad 6.2 \\ \times \quad 9 \\ \hline \end{array}$$

$$\begin{array}{r} 2) \quad 21.5 \\ \times \quad 7 \\ \hline \end{array}$$

$$\begin{array}{r} 3) \quad 37. \\ \times \quad 1 \\ \hline \end{array}$$

$$\begin{array}{r} 8.8 \\ \times \quad 6 \\ \hline \end{array}$$

$$\begin{array}{r} 5) \quad 15. \\ \times \quad 40 \\ \hline \end{array}$$

$$\begin{array}{r} 1.9 \\ \times \quad 40 \\ \hline \end{array}$$

PREVIEW

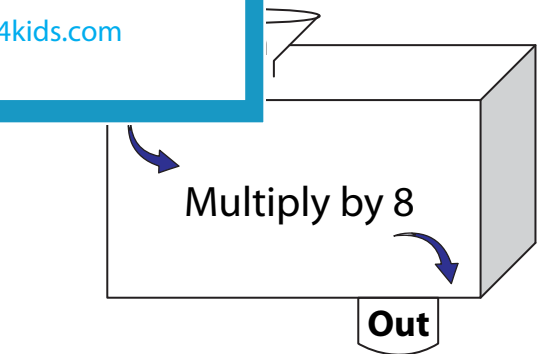
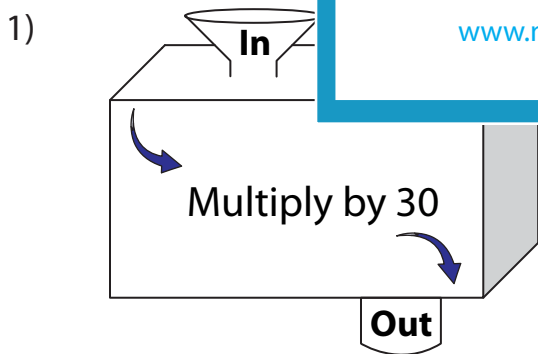
Gain complete access to the largest collection of worksheets in all subjects!

Members, please log in to download this worksheet.

Not a member? Please sign up to gain complete access.

www.mathworksheets4kids.com

B) Complete the in a



In	11.2	9.5
Out		

In	7.7	23.6
Out		

Name : _____

Multiplying Decimals by Whole Numbers

Tenths: L2S2

A) Find the product.

$$\begin{array}{r} 1) \quad 6.2 \\ \times \quad 9 \\ \hline 55.8 \end{array}$$

$$\begin{array}{r} 2) \quad 21.5 \\ \times \quad 7 \\ \hline 150.5 \end{array}$$

$$\begin{array}{r} 3) \quad 37.8 \\ \times \quad 13 \\ \hline 486.6 \end{array}$$

$$\begin{array}{r} 8.8 \\ \times \quad 6 \\ \hline 52.8 \end{array}$$

$$\begin{array}{r} 5) \quad 15.6 \\ \times \quad 2 \\ \hline 31.2 \end{array}$$

$$\begin{array}{r} 1.9 \\ \times \quad 40 \\ \hline 76.0 \end{array}$$

PREVIEW

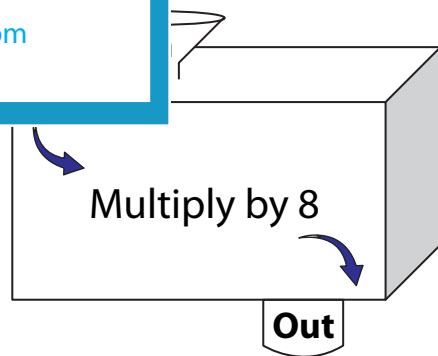
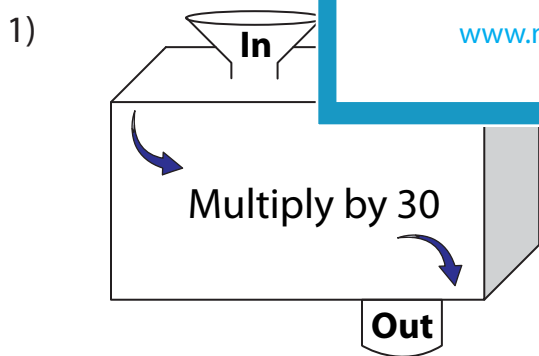
Gain complete access to the largest collection of worksheets in all subjects!

Members, please log in to download this worksheet.

Not a member? Please sign up to gain complete access.

www.mathworksheets4kids.com

B) Complete the in a



In	11.2	9.5
Out	336	285

In	7.7	23.6
Out	61.6	188.8