

Name : _____

Multiplying Decimals by Whole Numbers

Tenths: L2S3

A) Find the product.

$$\begin{array}{r} 1) \quad 18.3 \\ \times \quad 30 \\ \hline \end{array}$$

$$\begin{array}{r} 2) \quad 4.9 \\ \times \quad 2 \\ \hline \end{array}$$

$$\begin{array}{r} 3) \quad 40. \\ \times \quad 6.1 \\ \hline \end{array}$$

$$\begin{array}{r} 6.1 \\ \times 1.5 \\ \hline \end{array}$$

$$\begin{array}{r} 5) \quad 7. \\ \times \quad 1. \\ \hline \end{array}$$

$$\begin{array}{r} 3.7 \\ \times 8 \\ \hline \end{array}$$

PREVIEW

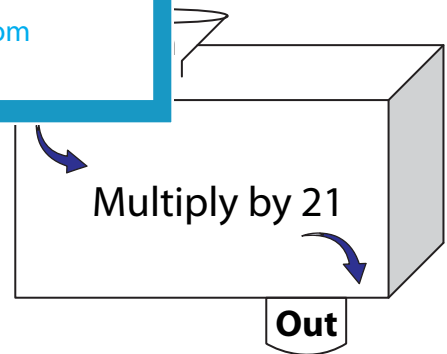
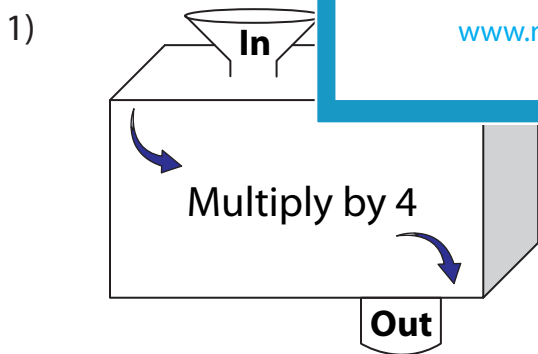
Gain complete access to the largest collection of worksheets in all subjects!

Members, please log in to download this worksheet.

Not a member? Please sign up to gain complete access.

www.mathworksheets4kids.com

B) Complete the in a



In	25.4	1.7
Out		

In	2.8	9.2
Out		

Name : _____

Multiplying Decimals by Whole Numbers

Tenths: L2S3

A) Find the product.

$$\begin{array}{r} 1) \quad 18.3 \\ \times \quad 30 \\ \hline 549.0 \end{array}$$

$$\begin{array}{r} 2) \quad 4.9 \\ \times \quad 2 \\ \hline 9.8 \end{array}$$

$$\begin{array}{r} 3) \quad 40. \\ \times \quad 7 \\ \hline 280. \end{array}$$

$$\begin{array}{r} 6.1 \\ \times 1.5 \\ \hline 9.15 \end{array}$$

$$\begin{array}{r} 5) \quad 7. \\ \times \quad 15 \\ \hline 105. \end{array}$$

$$\begin{array}{r} 3.7 \\ \times 8 \\ \hline 29.6 \end{array}$$

PREVIEW

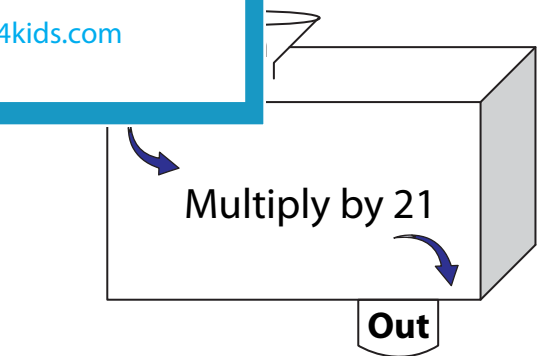
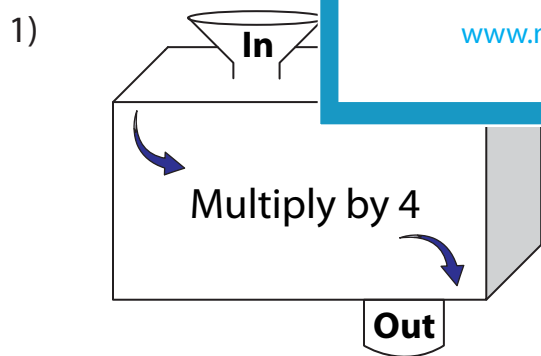
Gain complete access to the largest collection of worksheets in all subjects!

Members, please log in to download this worksheet.

Not a member? Please sign up to gain complete access.

www.mathworksheets4kids.com

B) Complete the in a



In	25.4	1.7
Out	101.6	6.8

In	2.8	9.2
Out	58.8	193.2