

Name : _____

Multiplying Decimals by Whole Numbers

Thousandths: L2S1

A) Find the product.

$$\begin{array}{r} 1) \quad 10.274 \\ \times \quad 9 \\ \hline \end{array}$$

$$\begin{array}{r} 2) \quad 4.116 \\ \times \quad 21 \\ \hline \end{array}$$

$$\begin{array}{r} 3) \quad 9.00 \\ \times \quad 6 \\ \hline \end{array}$$

$$\begin{array}{r} 3) \quad 392 \\ \times \quad 5 \\ \hline \end{array}$$

$$\begin{array}{r} 5) \quad 6.56 \\ \times \quad 1 \\ \hline \end{array}$$

$$\begin{array}{r} 5) \quad 921 \\ \times \quad 8 \\ \hline \end{array}$$

PREVIEW

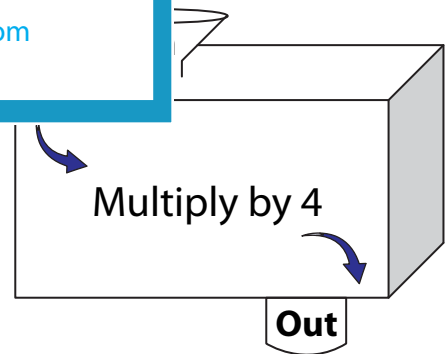
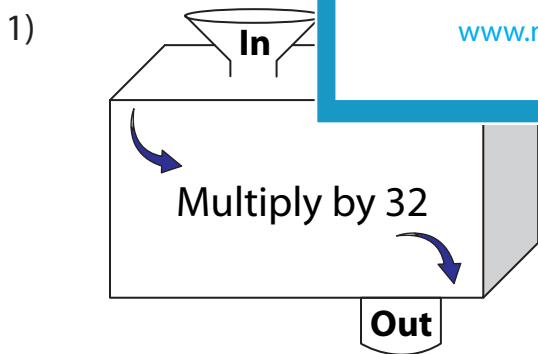
Gain complete access to the largest collection of worksheets in all subjects!

Members, please log in to download this worksheet.

Not a member? Please sign up to gain complete access.

www.mathworksheets4kids.com

B) Complete the in a



In	3.112	2.805
Out		

In	11.413	5.624
Out		

Multiplying Decimals by Whole Numbers

Thousandths: L2S1

A) Find the product.

$$\begin{array}{r} 1) \quad 10.274 \\ \times \quad 9 \\ \hline 92.466 \end{array}$$

$$\begin{array}{r} 2) \quad 4.116 \\ \times \quad 21 \\ \hline 86.436 \end{array}$$

$$\begin{array}{r} 3) \quad 9.00 \\ \times \quad 6 \\ \hline 540.42 \end{array}$$

$$\begin{array}{r} 3) \quad 392 \\ \times \quad 5 \\ \hline 960 \end{array}$$

$$\begin{array}{r} 5) \quad 6.56 \\ \times \quad 1 \\ \hline 91.96 \end{array}$$

$$\begin{array}{r} 9) \quad 21 \\ \times \quad 8 \\ \hline 368 \end{array}$$

PREVIEW

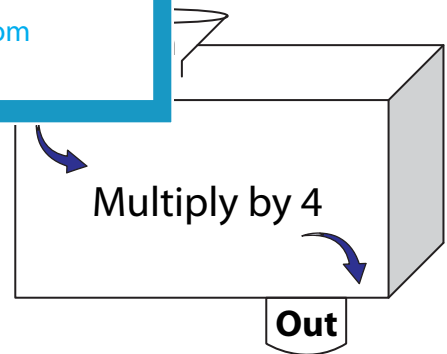
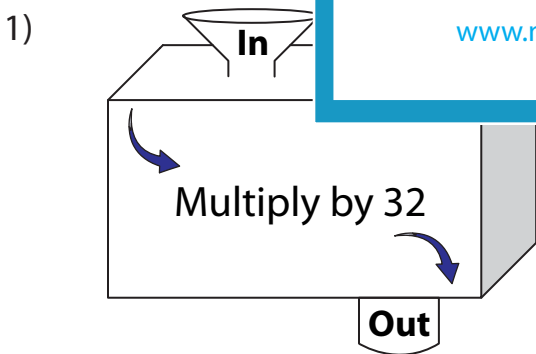
Gain complete access to the largest collection of worksheets in all subjects!

Members, please log in to download this worksheet.

Not a member? Please sign up to gain complete access.

www.mathworksheets4kids.com

B) Complete the in a



In	3.112	2.805
Out	99.584	89.76

In	11.413	5.624
Out	45.652	22.496