

Name : _____

Multiplying Decimals by Whole Numbers

Thousandths: L2S3

A) Find the product.

$$\begin{array}{r} 1) \quad 58.066 \\ \times \quad 5 \\ \hline \end{array}$$

$$\begin{array}{r} 2) \quad 1.518 \\ \times \quad 31 \\ \hline \end{array}$$

$$\begin{array}{r} 3) \quad 2.76 \\ \times \quad 5 \\ \hline \end{array}$$

$$\begin{array}{r} 363 \\ \times \quad 2 \\ \hline \end{array}$$

$$\begin{array}{r} 5) \quad 7.37 \\ \times \quad 10 \\ \hline \end{array}$$

$$\begin{array}{r} 729 \\ \times \quad 10 \\ \hline \end{array}$$

PREVIEW

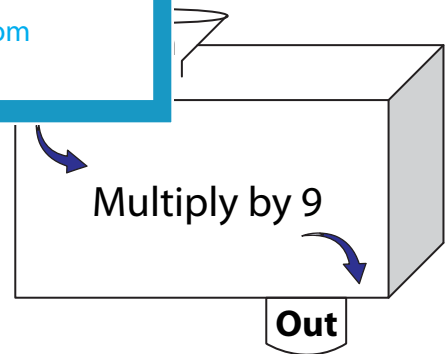
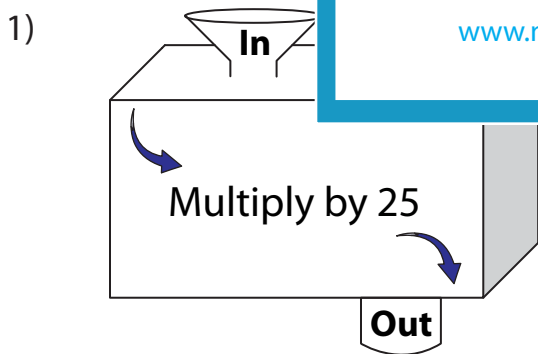
Gain complete access to the largest collection of worksheets in all subjects!

Members, please log in to download this worksheet.

Not a member? Please sign up to gain complete access.

www.mathworksheets4kids.com

B) Complete the in a



In	6.422	9.914
Out		

In	10.025	4.167
Out		

Name : _____

Multiplying Decimals by Whole Numbers

Thousandths: L2S3

A) Find the product.

$$\begin{array}{r} 1) \quad 58.066 \\ \times \quad 5 \\ \hline 290.330 \end{array}$$

$$\begin{array}{r} 2) \quad 1.518 \\ \times \quad 31 \\ \hline 47.058 \end{array}$$

$$\begin{array}{r} 3) \quad 2.763 \\ \times \quad 5 \\ \hline 151.915 \end{array}$$

$$\begin{array}{r} 3) \quad 363 \\ \times \quad 2 \\ \hline 726 \end{array}$$

$$\begin{array}{r} 5) \quad 7.37 \\ \times \quad 4 \\ \hline 29.50 \end{array}$$

$$\begin{array}{r} 7) \quad 29 \\ \times \quad 10 \\ \hline 290 \end{array}$$

PREVIEW

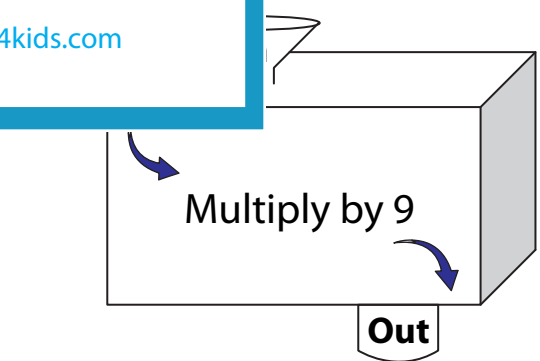
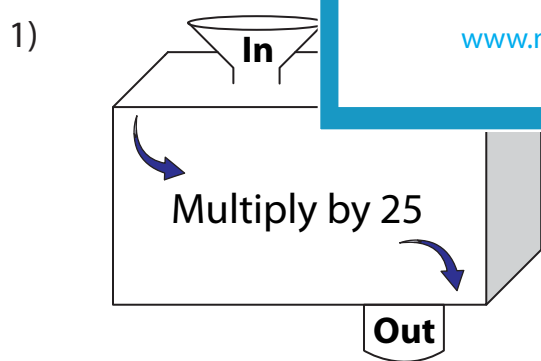
Gain complete access to the largest collection of worksheets in all subjects!

Members, please log in to download this worksheet.

Not a member? Please sign up to gain complete access.

www.mathworksheets4kids.com

B) Complete the in a



In	6.422	9.914
Out	160.55	247.85

In	10.025	4.167
Out	90.225	37.503