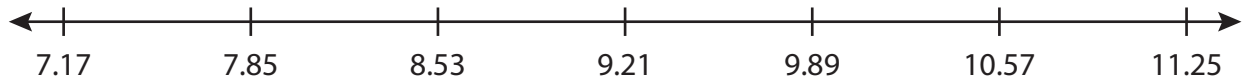


Ordering - Number Lines

Sheet 3

- 1) Read the number line. Write each set of decimals in increasing order.



- a) 8.53, 9.212, 9.221, 8.35, 8.3

- b) 9.714, 9.21

- c) 10.085, 9.89

- 2) Read the number line. Write each set of decimals in increasing order.



- a) 3.627, 3.91

- b) 3.9, 4.58, 2.625, 4.589, 2.69

- c) 4.423, 4.47, 2.74, 3.909, 3.91

PREVIEW

Gain complete access to the largest
collection of worksheets in all subjects!

Members, please
log in to
download this
worksheet.

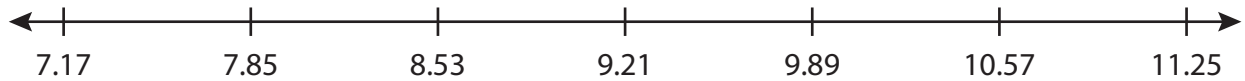
Not a member?
Please sign up to
gain complete
access.

www.mathworksheets4kids.com

Answer key**Ordering - Number Lines**

Sheet 3

- 1) Read the number line. Write each set of decimals in increasing order.



- a) 8.53, 9.212, 9.221, 8.35, 8.3

8.3, 8.3


- b) 9.714, 9.

7.8, 7.8

- c) 10.085,

10.085,

- 2) Read the number



- a) 3.627, 3.

3.75, 3.

- b) 3.9, 4.58, 2.625, 4.589, 2.69

4.589, 4.58, 3.9, 2.69, 2.625

- c) 4.423, 4.47, 2.74, 3.909, 3.91

4.47, 4.423, 3.91, 3.909, 2.74

PREVIEW

Gain complete access to the largest collection of worksheets in all subjects!

Members, please log in to download this worksheet.

Not a member? Please sign up to gain complete access.

www.mathworksheets4kids.com