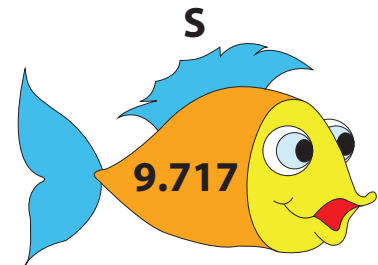
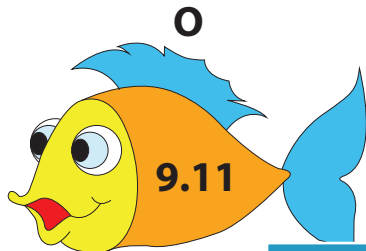


Ordering Decimals

Increasing: S2

Arrange the decimals displayed on the fish in increasing order. Line-up the corresponding letters to solve the riddle below.



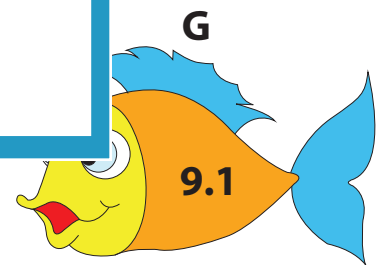


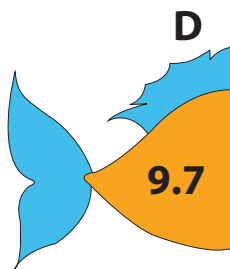
PREVIEW

Gain complete access to the largest collection of worksheets in all subjects!

Members, please log in to download this worksheet.

Not a member? Please sign up to gain complete access.

www.mathworksheets4kids.com

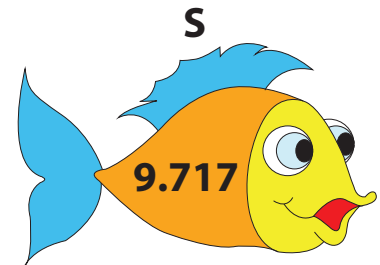



What do you call a rich fish?

Answer key**Ordering Decimals**

Increasing: S2

Arrange the decimals displayed on the fish in increasing order. Line-up the corresponding letters to solve the riddle below.



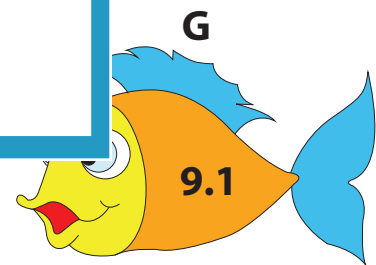



PREVIEW

Gain complete access to the largest collection of worksheets in all subjects!

Members, please log in to download this worksheet.

Not a member? Please sign up to gain complete access.

www.mathworksheets4kids.com



What do you call a rich fish?

GOLDFISH