





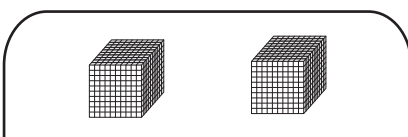
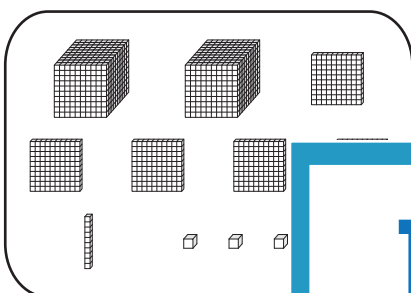
Name : \_\_\_\_\_

Regrouping: S3

# Decimal Subtraction - Hundredths

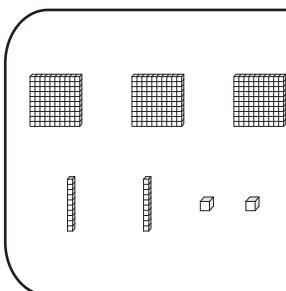
Tens	Ones	Tenths	Hundredths
			

1)



\_\_\_\_\_

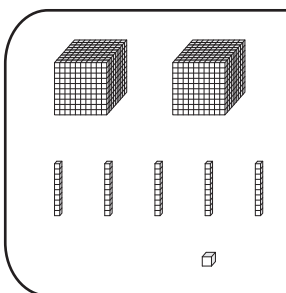
2)



**PREVIEW**  
Gain complete access to the largest collection of worksheets in all subjects!

\_\_\_\_\_

3)

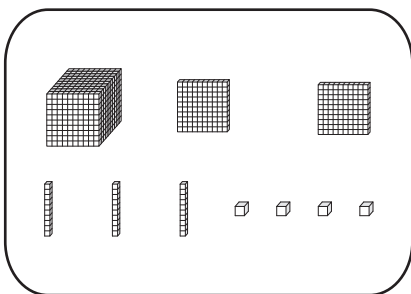


Members, please log in to download this worksheet.  
Not a member? Please sign up to gain complete access.

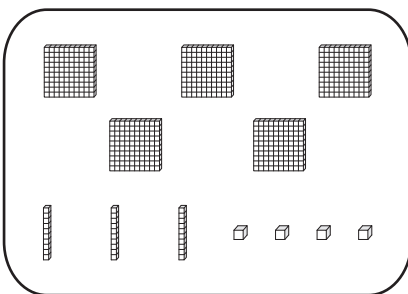
\_\_\_\_\_

[www.mathworksheets4kids.com](http://www.mathworksheets4kids.com)

4)



-



=

\_\_\_\_\_