




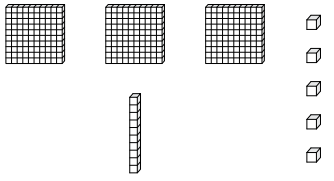
Name : \_\_\_\_\_

# Subtraction Sentence - Tenths


No regrouping: S1

Tens	Ones	Tenths
		

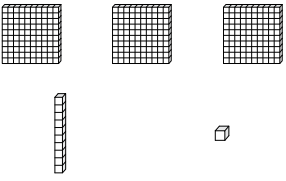
1)



-



=



---

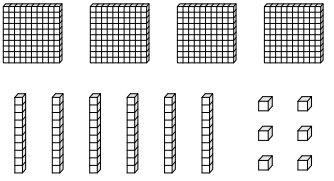
-


---

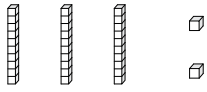
=


---

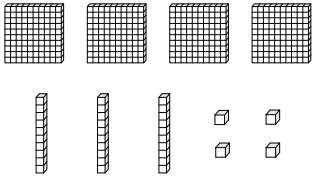
2)



-



=



---

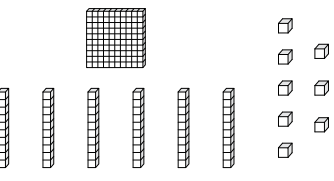
-


---

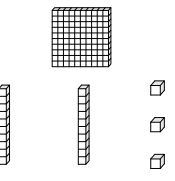
=


---

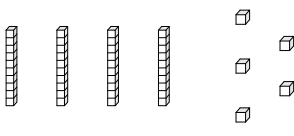
3)



-



=



---

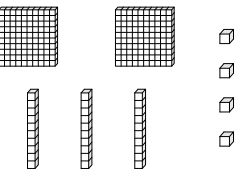
-


---

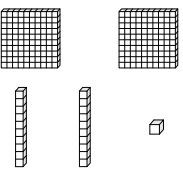
=


---


4)



-



=



---

-


---

=


---

Name : \_\_\_\_\_

**Answer key**

**Subtraction Sentence - Tenths**

No regrouping: S1

Tens	Ones	Tenths

1) - =

31.5 - 0.4 = 31.1

2) - =

46.6 - 3.2 = 43.4

3) - =

16.8 - 12.3 = 4.5

4) - =

23.4 - 22.1 = 1.3