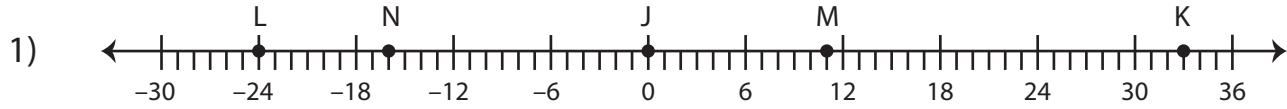


## Length of the Line Segments

Use the number line to find the length.



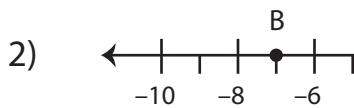
a) LM = 35 units

d) NK - JM = \_\_\_\_\_

b) JK + NJ = \_\_\_\_\_

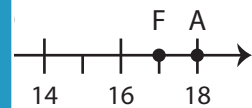
e) LN = \_\_\_\_\_

c) JM = \_\_\_\_\_



**PREVIEW**

Gain complete access to the largest collection of worksheets in all subjects!



a) GD - HD = \_\_\_\_\_

= \_\_\_\_\_

b) EF = \_\_\_\_\_

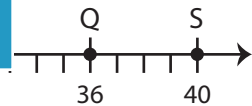
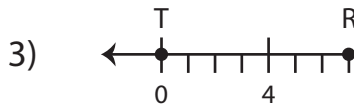
= \_\_\_\_\_

c) CH + DF = \_\_\_\_\_

Members, please log in to download this worksheet.

Not a member? Please sign up to gain complete access.

[www.mathworksheets4kids.com](http://www.mathworksheets4kids.com)



a) QS = \_\_\_\_\_

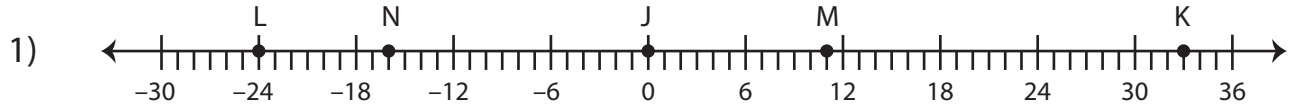
d) TR + PU = \_\_\_\_\_

b) RU - VP = \_\_\_\_\_

c) UQ = \_\_\_\_\_

## Length of the Line Segments

Use the number line to find the length.



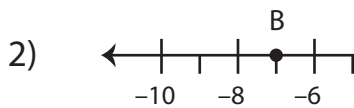
a) LM = 35 units

d) NK - JM = 38 units

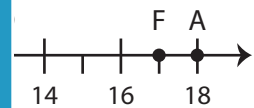
b) JK + NJ = 49 units

e) LN = 8 units

c) JM = 16 units



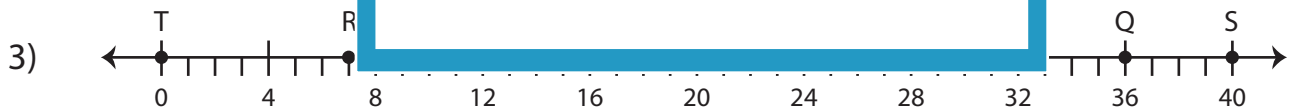
**PREVIEW**  
Gain complete access to the largest  
collection of worksheets in all subjects!



a) GD - HD = 1 unit

b) EF = 9 units

c) CH + DF = 10 units



a) QS = 4 units

d) TR + PU = 12 units

b) RU - VP = 18 units

c) UQ = 7 units