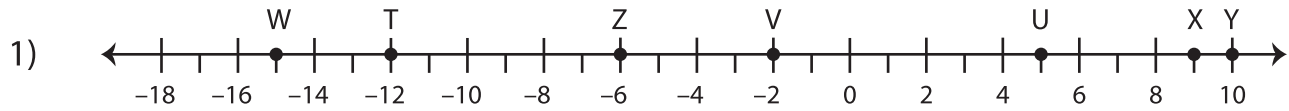


Length of the Line Segments

Use the number line to find the length.



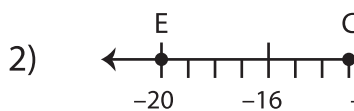
a) $ZU + XY =$ 12 units

d) $WT =$ _____

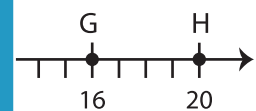
b) $UX =$ _____

e) $WY - XY =$ _____

c) $WV =$ _____



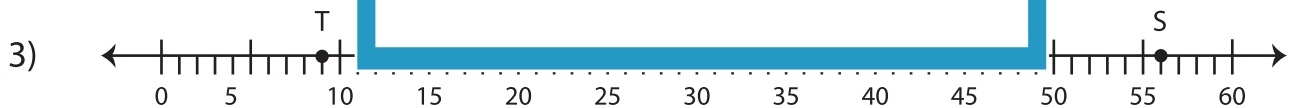
PREVIEW
Gain complete access to the largest
collection of worksheets in all subjects!



a) $CD =$ _____

b) $DH =$ _____

c) $ED - CD =$ _____



a) $QP - RP =$ _____

d) $QR =$ _____

b) $PS =$ _____

e) $RP =$ _____

c) $TS =$ _____

f) $TQ + TP =$ _____