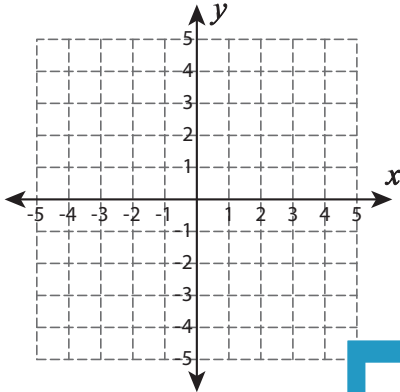


Distance Formula - Perimeter

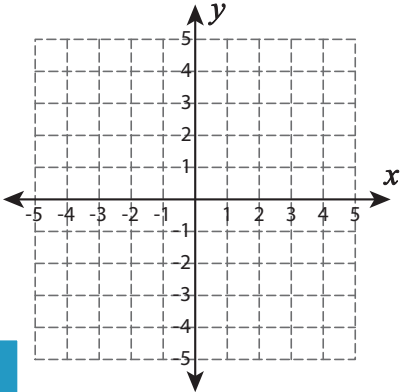
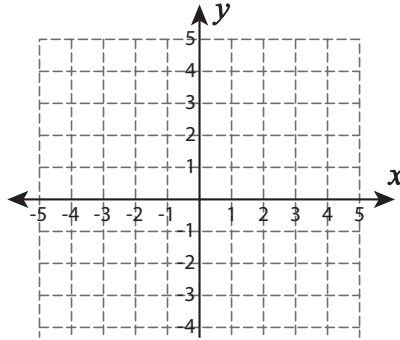
Graph the points and find the perimeter of each shape. Round the answer to two decimal places.

1) $(1, -4), (3, -4), (4, -3), (1, -2)$



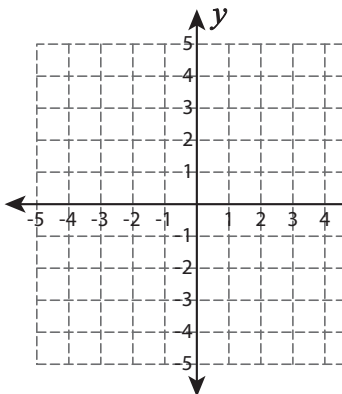
Perimeter = _____

2) $(-2, 1), (3, 1), (4, 3), (-1, 3)$



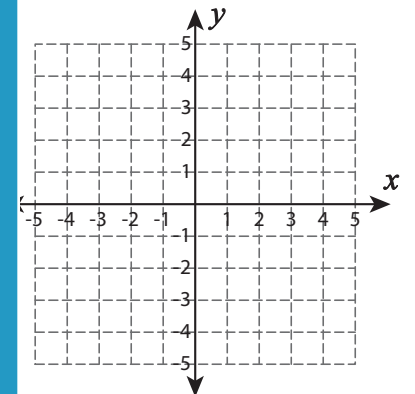
Perimeter = _____

4) $(-4, -4), (0, -4), (-3, -1)$



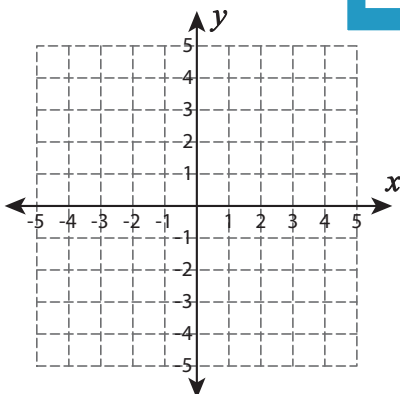
Perimeter = _____

$(-4, 1), (-2, 1), (-2, 3), (-4, 3)$

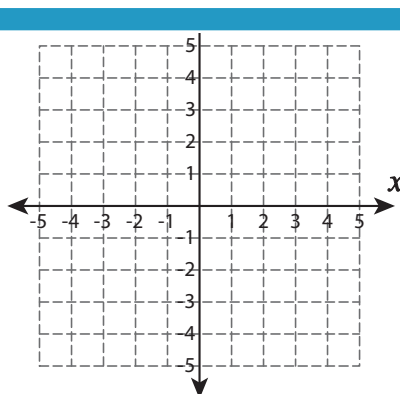


Perimeter = _____

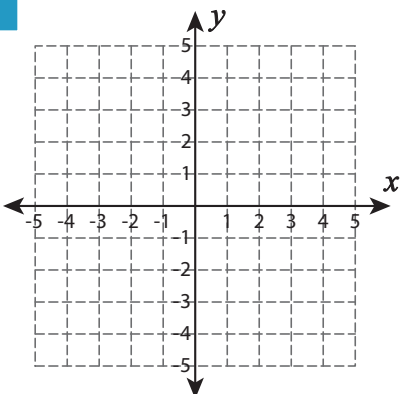
7) $(3, 0), (4, 2), (2, 4), (-1, 2)$



Perimeter = _____



Perimeter = _____



Perimeter = _____

PREVIEW

Gain complete access to the largest collection of worksheets in all subjects!

Members, please log in to download this worksheet.

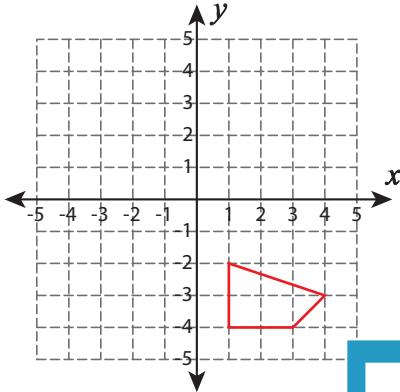
Not a member? Please sign up to gain complete access.

www.mathworksheets4kids.com

Distance Formula - Perimeter

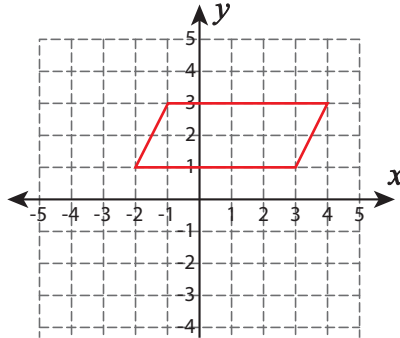
Graph the points and find the perimeter of each shape. Round the answer to two decimal places.

1) $(1, -4), (3, -4), (4, -3), (1, -2)$

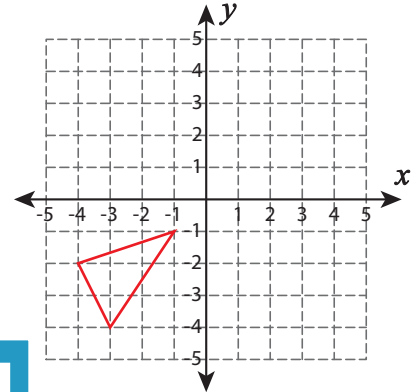


Perimeter = 8.57 un

2) $(-2, 1), (3, 1), (4, 3), (-1, 3)$

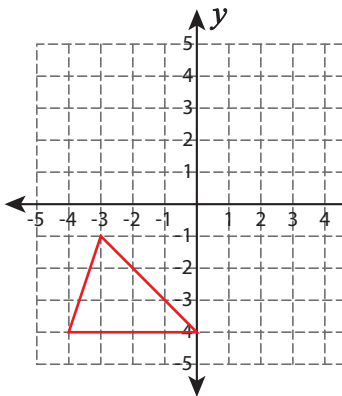


3) $(-3, -4), (-1, -1), (-4, -2)$



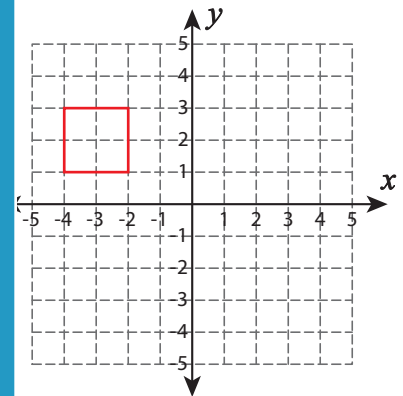
Perimeter = 9.01 units

4) $(-4, -4), (0, -4), (-3, -1)$



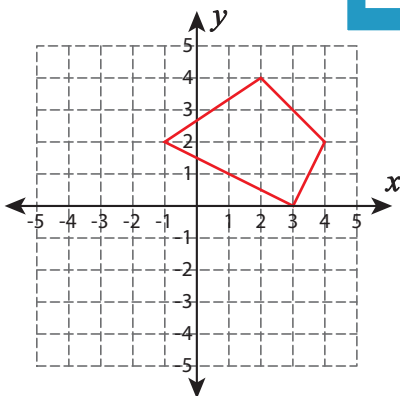
Perimeter = 11.4 un

5) $(-4, 1), (-2, 1), (-2, 3), (-4, 3)$



Perimeter = 8 units

7) $(3, 0), (4, 2), (2, 4), (-1, 2)$



Perimeter = 13.15 units

www.mathworksheets4kids.com

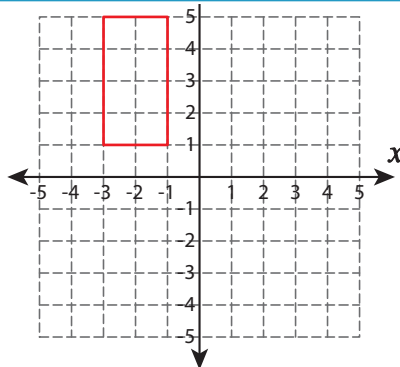
PREVIEW

Gain complete access to the largest collection of worksheets in all subjects!

Members, please log in to download this worksheet.

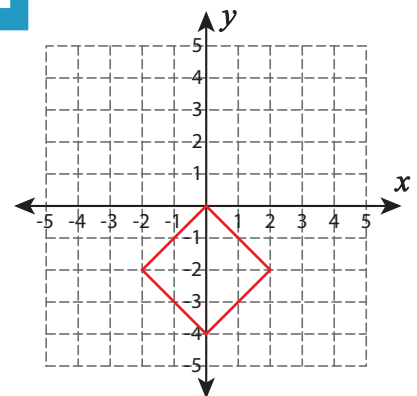
Not a member? Please sign up to gain complete access.

8) $(-2, 0), (0, 0), (-2, -2), (0, -4), (2, -2)$



Perimeter = 12 units

9) $(0, 0), (-2, -2), (0, -4), (2, -2)$



Perimeter = 11.32 units