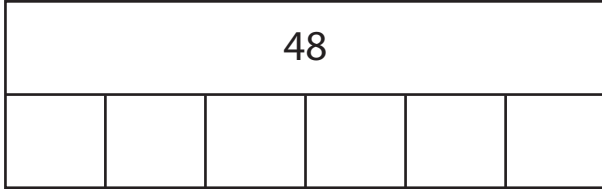


Name: \_\_\_\_\_

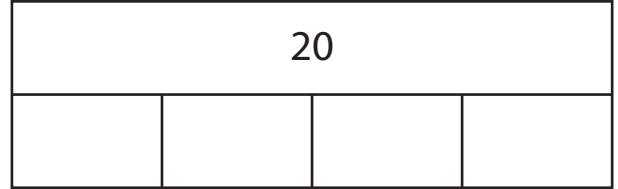
## Division - Bar Model

Sheet 1

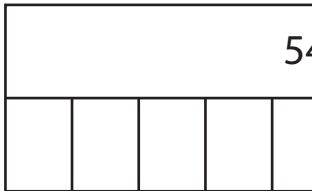
1)  $48 \div 6 =$  \_\_\_\_\_



2)  $20 \div 4 =$  \_\_\_\_\_



3)  $54 \div 9 =$  \_\_\_\_\_



# PREVIEW

Gain complete access to the largest collection of worksheets in all subjects!

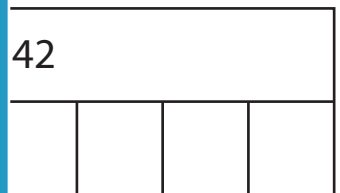
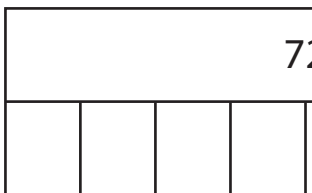
Members, please log in to download this worksheet.

Not a member? Please sign up to gain complete access.

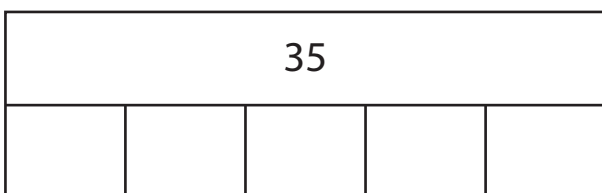
[www.mathworksheets4kids.com](http://www.mathworksheets4kids.com)



5)  $72 \div 8 =$  \_\_\_\_\_



7)  $35 \div 5 =$  \_\_\_\_\_



8)  $27 \div 3 =$  \_\_\_\_\_

