

Name : _____

Comparing Quantities

ES3

Roger, the alligator loves to chomp on the greater quantity. Cut out the jaws from the bottom of the page and glue them in the correct boxes.

1) $35 \div 5$	<input type="checkbox"/>	4	2) $8 \div 1$	<input type="checkbox"/>	7
3) $18 \div 3$	<input type="checkbox"/>	5	4) $42 \div 6$	<input type="checkbox"/>	8
5) $20 \div 4$	<input type="checkbox"/>			<input type="checkbox"/>	6
7) $45 \div 9$	<input type="checkbox"/>			<input type="checkbox"/>	9
9) $40 \div 5$	<input type="checkbox"/>			<input type="checkbox"/>	2
11) $36 \div 6$	<input type="checkbox"/>			<input type="checkbox"/>	4
13) $72 \div 8$	<input type="checkbox"/>			<input type="checkbox"/>	5
15) $14 \div 2$	<input type="checkbox"/>	1	16) $15 \div 3$	<input type="checkbox"/>	3

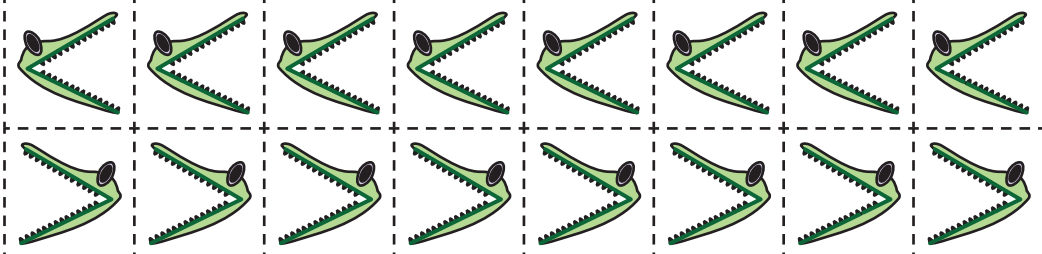
PREVIEW

Gain complete access to the largest collection of worksheets in all subjects!

Members, please log in to download this worksheet.

Not a member? Please sign up to gain complete access.

www.mathworksheets4kids.com



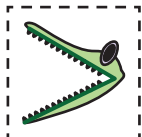
Name : _____

Comparing Quantities

ES3


Roger, the alligator loves to chomp on the greater quantity. Cut out the jaws from the bottom of the page and glue them in the correct boxes.

1) $35 \div 5$




4

2) $8 \div 1$



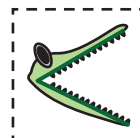
7

3) $18 \div 3$



5

4) $42 \div 6$

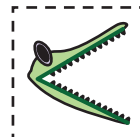


8

5) $20 \div 4$



PREVIEW

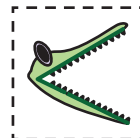


6

7) $45 \div 9$



Gain complete access to the largest collection of worksheets in all subjects!




9

9) $40 \div 5$



Members, please log in to download this worksheet.

Not a member? Please sign up to gain complete access.

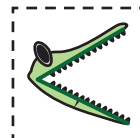


2

11) $36 \div 6$




www.mathworksheets4kids.com



4

13) $72 \div 8$




5

15) $14 \div 2$



1

16) $15 \div 3$



3