

Name : _____

Comparing Quantities

MS3

The crazy frog loves to eat the greater number. Cut out the crazy frog's pictures from the bottom of the page and glue them in the correct boxes.

1) $30 \div 5$



$20 \div 5$

2) $7 \div 1$



$16 \div 4$

3) $4 \div 2$




$21 \div 7$

4) $24 \div 4$



$42 \div 6$

5) $18 \div 3$



PREVIEW

Gain complete access to the largest collection of worksheets in all subjects!

Members, please log in to download this worksheet.

Not a member? Please sign up to gain complete access.

www.mathworksheets4kids.com


$32 \div 8$

7) $49 \div 7$



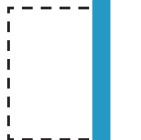
$10 \div 5$

9) $81 \div 9$



$63 \div 9$

11) $25 \div 5$



$28 \div 7$

13) $12 \div 2$



$8 \div 2$

15) $24 \div 8$

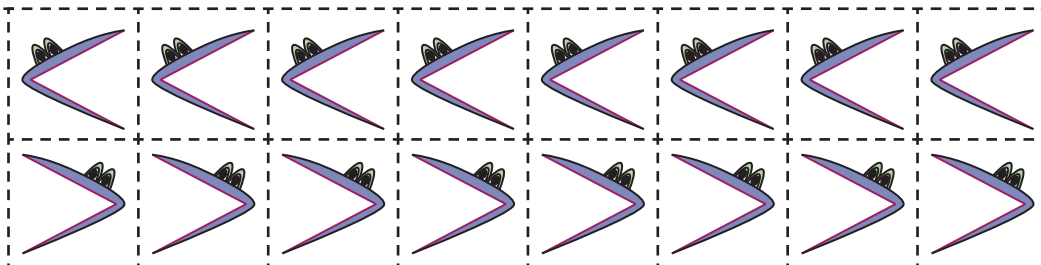


$24 \div 3$

16) $6 \div 6$



$36 \div 4$



Name : _____

Comparing Quantities

The crazy frog loves to eat the greater number. Cut out the crazy frog's pictures from the bottom of the page and glue them in the correct boxes.

1) $30 \div 5$



$20 \div 5$

2) $7 \div 1$



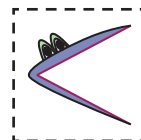
$16 \div 4$

3) $4 \div 2$



$21 \div 7$

4) $24 \div 4$



$42 \div 6$

5) $18 \div 3$

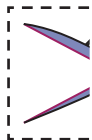


PREVIEW



$32 \div 8$

7) $49 \div 7$

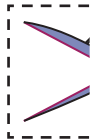


Gain complete access to the largest collection of worksheets in all subjects!



$10 \div 5$

9) $81 \div 9$



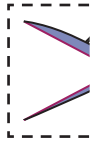
Members, please log in to download this worksheet.

Not a member? Please sign up to gain complete access.



$63 \div 9$

11) $25 \div 5$



$28 \div 7$

13) $12 \div 2$



www.mathworksheets4kids.com



$8 \div 2$

15) $24 \div 8$



$24 \div 3$

16) $6 \div 6$



$36 \div 4$