

Name : \_\_\_\_\_

## Division

Sheet 1

1)  $3 \div 3 =$

2)  $64 \div 8 =$

3)  $7 \div 1 =$

4)  $14 \div 7 =$

5)  $18 \div 2 =$

6)  $20 \div 5 =$

7)  $24 \div 4 =$

9)  $18 \div 6 =$

10) Sarah learns 4  
Sarah take to l

How many days will


# PREVIEW

Gain complete access to the largest  
collection of worksheets in all subjects!

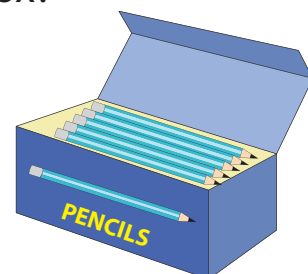
Members, please  
log in to  
download this  
worksheet.

Not a member?  
Please sign up to  
gain complete  
access.

[www.mathworksheets4kids.com](http://www.mathworksheets4kids.com)



11) The teacher gave Janet 42 pencils and asked her to pack it equally in 7 boxes. How many pencils did she pack in each box?



Name : \_\_\_\_\_

Division

Sheet 1

1)  $3 \div 3 = 1$

2)  $64 \div 8 = 8$

3)  $7 \div 1 = 7$

4)  $14 \div 7 = 2$

5)  $18 \div 2 = 9$

6)  $20 \div 5 = 4$

7)  $24 \div 4 = 6$

9)  $18 \div 6 = 3$

# PREVIEW

Gain complete access to the largest collection of worksheets in all subjects!

Members, please log in to download this worksheet.


Not a member? Please sign up to gain complete access.

[www.mathworksheets4kids.com](http://www.mathworksheets4kids.com)

10) Sarah learns 4  
Sarah take to l

How many days will

**7 d**



11) The teacher gave Janet 42 pencils and asked her to pack it equally in 7 boxes. How many pencils did she pack in each box?

**6 pencils**

