

Name : _____

Division

Sheet 3

1) $28 \div 7 =$

2) $6 \div 2 =$

3) $40 \div 8 =$

4) $24 \div 3 =$

5) $36 \div 6 =$

6) $9 \div 9 =$

7) $35 \div 5 =$

9) $8 \div 4 =$

PREVIEW

Gain complete access to the largest
collection of worksheets in all subjects!


Members, please
log in to
download this
worksheet.


Not a member?
Please sign up to
gain complete
access.

www.mathworksheets4kids.com

10) Kylie has just started a stamp book. If she has used 12 stamps pasted in her stamp book, how many pages has she used?

11) Mom bought 81 cookies for Jessica's birthday. She arranged them in 9 plates equally and distributed these to her friends. How many cookies did Jessica arrange on each plate?





Name : _____

Division

1) $28 \div 7 = 4$

2) $6 \div 2 = 3$

3) $40 \div 8 = 5$

4) $24 \div 3 = 8$

5) $36 \div 6 = 6$

6) $9 \div 9 = 1$

7) $35 \div 5 = 7$

9) $8 \div 4 = 2$

PREVIEW

Gain complete access to the largest collection of worksheets in all subjects!


Members, please log in to download this worksheet.

Not a member? Please sign up to gain complete access.

www.mathworksheets4kids.com


10) Kylie has just sent 5 stamps to her friend. If she has 10 stamps in her stamp book, how many stamps has she used?

11) Mom bought 81 cookies for Jessica's birthday. She arranged them in 9 plates equally and distributed these to her friends. How many cookies did Jessica arrange on each plate?



5 pa

11) Mom bought 81 cookies for Jessica's birthday. She arranged them in 9 plates equally and distributed these to her friends. How many cookies did Jessica arrange on each plate?



9 cookies