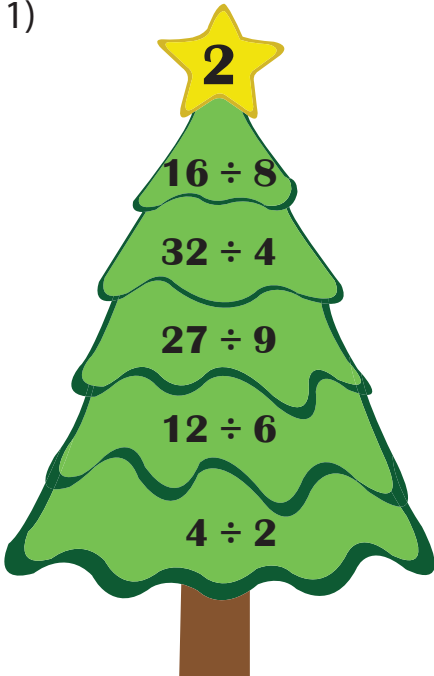


Name : _____

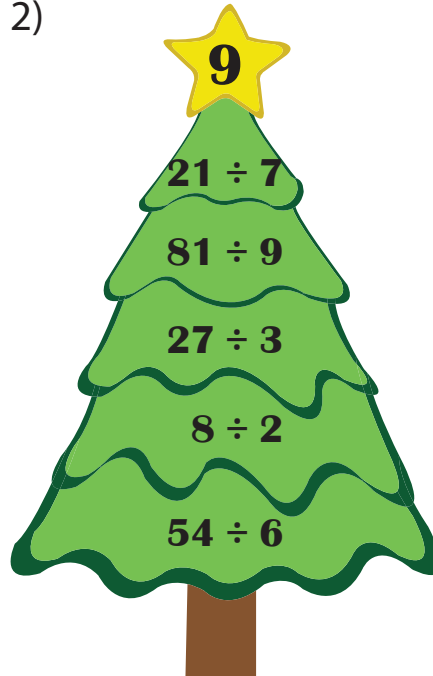
Multiple Responses

Identify the division sentences that equal the number displayed on each star.

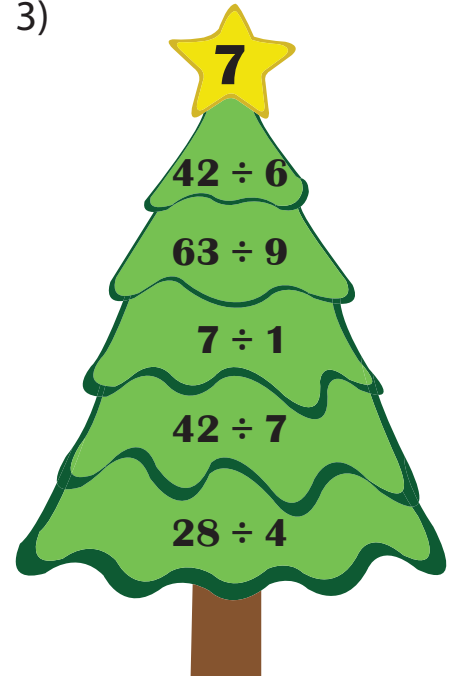
1)



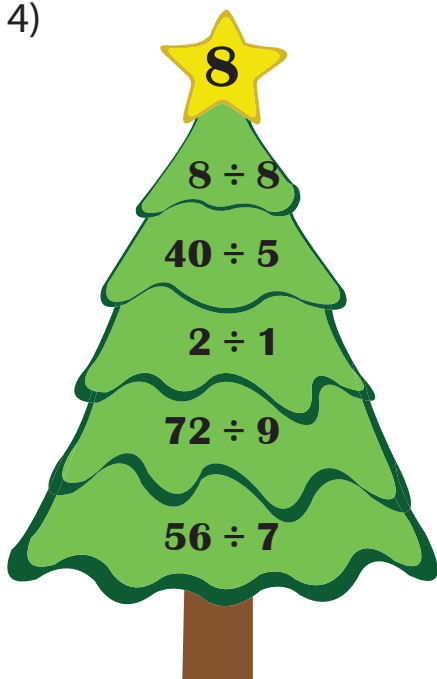
2)



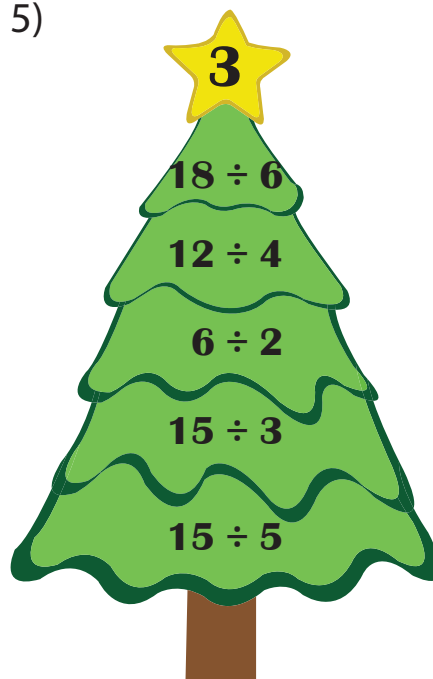
3)



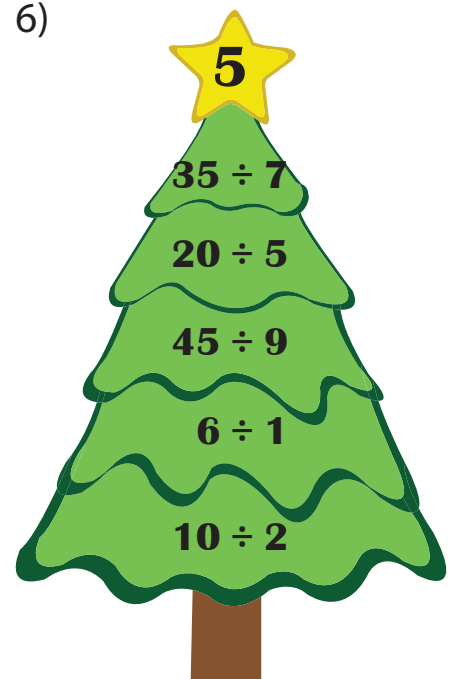
4)



5)



6)



Name : _____

Multiple Responses

Identify the division sentences that equal the number displayed on each star.

1)

2

$16 \div 8$ ✓

$32 \div 4$

$27 \div 9$

$12 \div 6$ ✓

$4 \div 2$ ✓

2)

9

$21 \div 7$

$81 \div 9$ ✓

$27 \div 3$ ✓

$8 \div 2$

$54 \div 6$ ✓

3)

7

$42 \div 6$ ✓

$63 \div 9$ ✓

$7 \div 1$ ✓

$42 \div 7$

$28 \div 4$ ✓

4)

8

$8 \div 8$

$40 \div 5$ ✓

$2 \div 1$

$72 \div 9$ ✓

$56 \div 7$ ✓

5)

3

$18 \div 6$ ✓

$12 \div 4$ ✓

$6 \div 2$ ✓

$15 \div 3$

$15 \div 5$ ✓

6)

5

$35 \div 7$ ✓

$20 \div 5$

$45 \div 9$ ✓

$6 \div 1$

$10 \div 2$ ✓