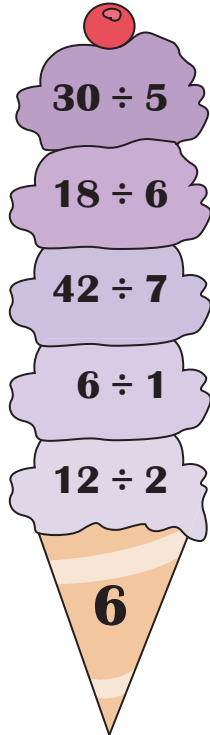


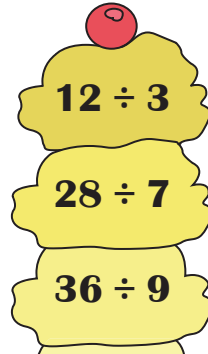
## Multiple Responses

Identify the division sentences that equal the number displayed on each cone.

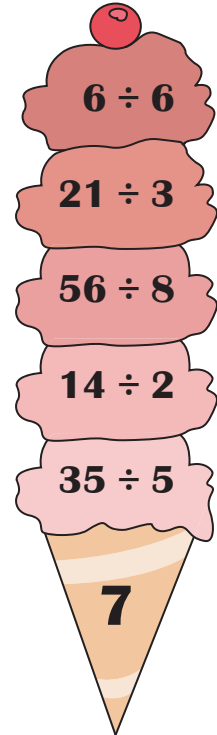
1)



2)



3)



# PREVIEW

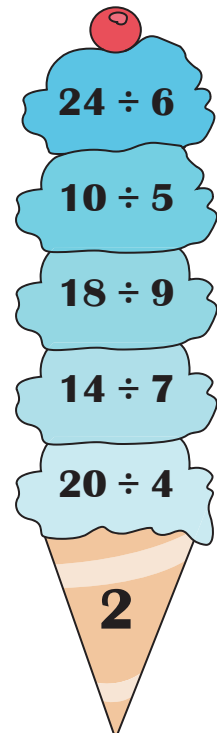

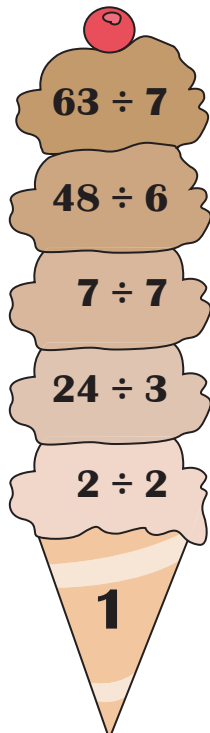
Gain complete access to the largest collection of worksheets in all subjects!

Members, please log in to download this worksheet.

Not a member? Please sign up to gain complete access.

[www.mathworksheets4kids.com](http://www.mathworksheets4kids.com)

4)



**Multiple Responses**

Identify the division sentences that equal the number displayed on each cone.

1)

$30 \div 5$  ✓  
 $18 \div 6$  ✓  
 $42 \div 7$  ✓  
 $6 \div 1$  ✓  
 $12 \div 2$  ✓  
**6**

2)

$12 \div 3$  ✓  
 $28 \div 7$  ✓  
 $36 \div 9$  ✓

3)

$6 \div 6$  ✓  
 $21 \div 3$  ✓  
 $56 \div 8$  ✓  
 $14 \div 2$  ✓  
 $35 \div 5$  ✓  
**7**

**PREVIEW**

Gain complete access to the largest collection of worksheets in all subjects!

Members, please log in to download this worksheet.

Not a member? Please sign up to gain complete access.

[www.mathworksheets4kids.com](http://www.mathworksheets4kids.com)

4)

$63 \div 7$  ✓  
 $48 \div 6$  ✓  
 $7 \div 7$  ✓  
 $24 \div 3$  ✓  
 $2 \div 2$  ✓  
**1**

$54 \div 9$  ✓  
 $72 \div 8$  ✓  
**9**

$24 \div 6$  ✓  
 $10 \div 5$  ✓  
 $18 \div 9$  ✓  
 $14 \div 7$  ✓  
 $20 \div 4$  ✓  
**2**