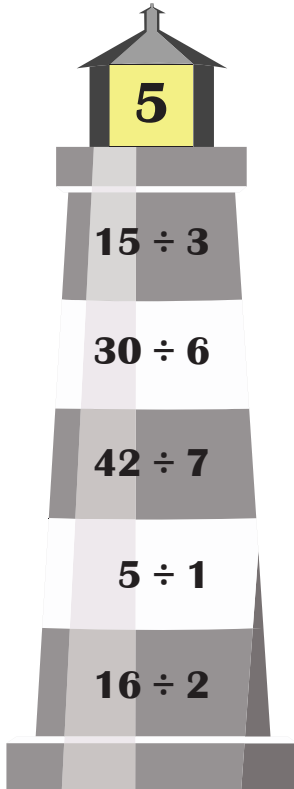


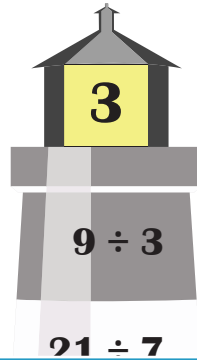
Multiple Responses

Identify the division sentences that equal the number displayed on each light.

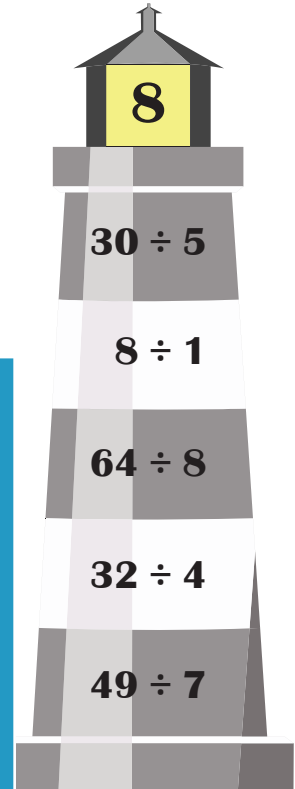
1)



2)



3)



PREVIEW

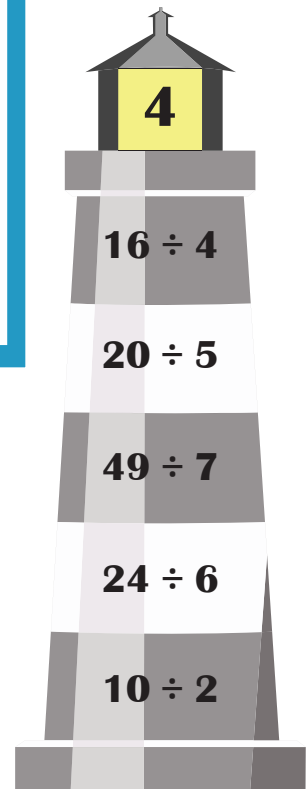
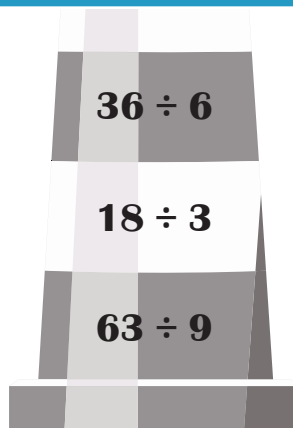
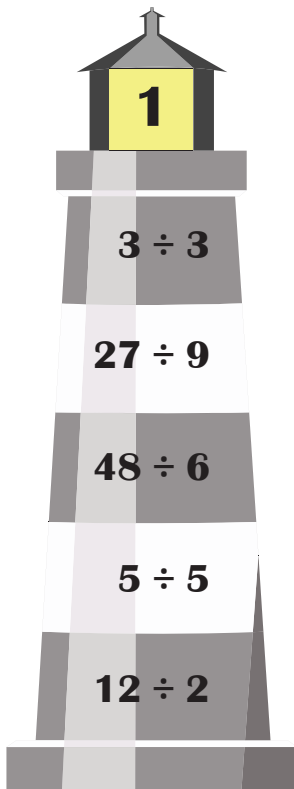
Gain complete access to the largest collection of worksheets in all subjects!

Members, please log in to download this worksheet.

Not a member? Please sign up to gain complete access.

www.mathworksheets4kids.com

4)



Multiple Responses

Identify the division sentences that equal the number displayed on each light.

1)

5

$15 \div 3$ ✓

$30 \div 6$ ✓

$42 \div 7$

$5 \div 1$ ✓

$16 \div 2$

2)

3

$9 \div 3$ ✓

$21 \div 7$ ✓

3)

8

$30 \div 5$

$8 \div 1$ ✓

$64 \div 8$ ✓

$32 \div 4$ ✓

$49 \div 7$

PREVIEW

Gain complete access to the largest collection of worksheets in all subjects!

Members, please log in to download this worksheet.

Not a member? Please sign up to gain complete access.

www.mathworksheets4kids.com

4)

1

$3 \div 3$ ✓

$27 \div 9$

$48 \div 6$

$5 \div 5$ ✓

$12 \div 2$

$36 \div 6$ ✓

$18 \div 3$ ✓

$63 \div 9$

4

$16 \div 4$ ✓

$20 \div 5$ ✓

$49 \div 7$

$24 \div 6$ ✓

$10 \div 2$