

Division Groups

Sheet 1



1) Divide into groups of 5:



a) How many groups of 5 can you form?

b) How many items left over?

3) Divide into groups of 7:



a) How many groups of 7 can you form?

b) How many items left over?

5) Divide into groups of 2:



a) How many groups of 2 can you form?

b) How many items left over?


7) Divide into groups of 9:



a) How many groups of 9 can you form?

b) How many items left over?


2) Divide into groups of 3:



a) How many groups of 3 can you form?

b) How many items left over?

4) Divide into groups of 4:



a) How many groups of 4 can you form?

b) How many items left over?

6) Divide into groups of 6:



a) How many groups of 6 can you form?

b) How many items left over?

8) Divide into groups of 8:



a) How many groups of 8 can you form?

b) How many items left over?

Answer key**Division Groups**

Sheet 1



1) Divide into groups of 5:



a) How many groups of 5 can you form?

3

b) How many items left over?

2

3) Divide into groups of 7:



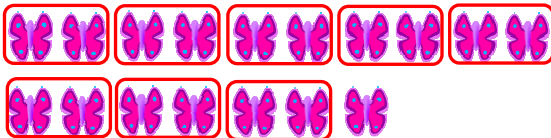
a) How many groups of 7 can you form?

3

b) How many items left over?

6

5) Divide into groups of 2:




a) How many groups of 2 can you form?

8

b) How many items left over?

1

7) Divide into groups of 9:



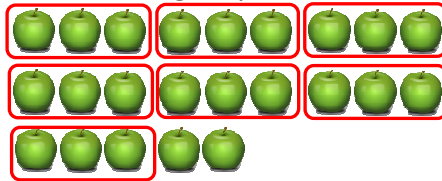
a) How many groups of 9 can you form?

2

b) How many items left over?

8

2) Divide into groups of 3:




a) How many groups of 3 can you form?

7

b) How many items left over?

2

4) Divide into groups of 4:



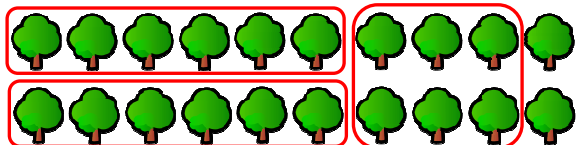
a) How many groups of 4 can you form?

8

b) How many items left over?

1

6) Divide into groups of 6:



a) How many groups of 6 can you form?

3

b) How many items left over?

2

8) Divide into groups of 8:



a) How many groups of 8 can you form?

2

b) How many items left over?

4