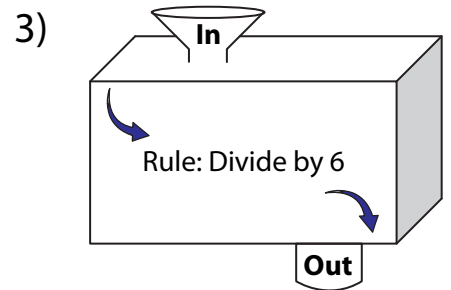
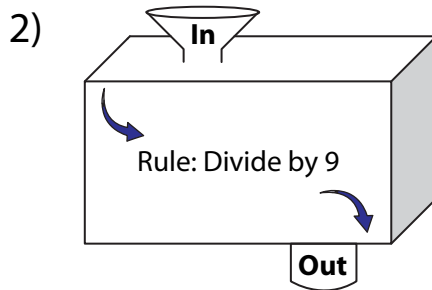
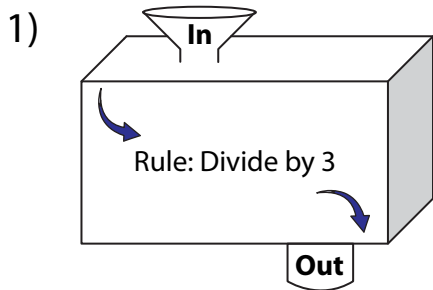


In and Out Boxes

A) Complete the in and out boxes using the given rule.



In	12	30
Out		

--	--	--	--

In	30	60	90
Out			

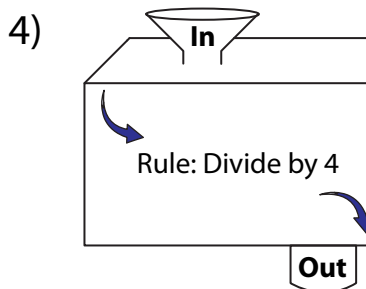
PREVIEW

Gain complete access to the largest collection of worksheets in all subjects!

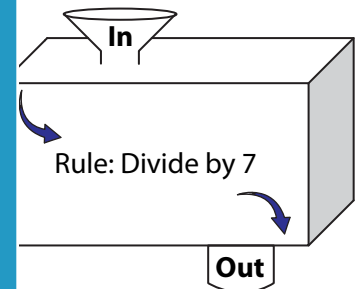
Members, please log in to download this worksheet.

Not a member? Please sign up to gain complete access.

www.mathworksheets4kids.com

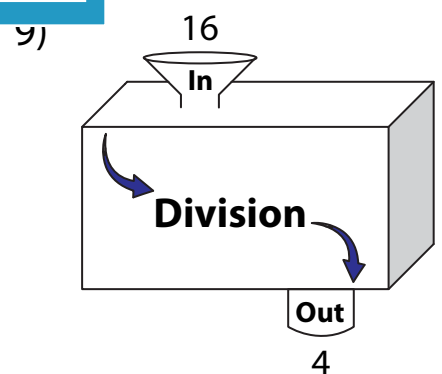
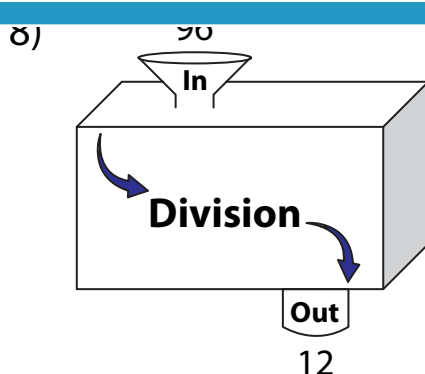
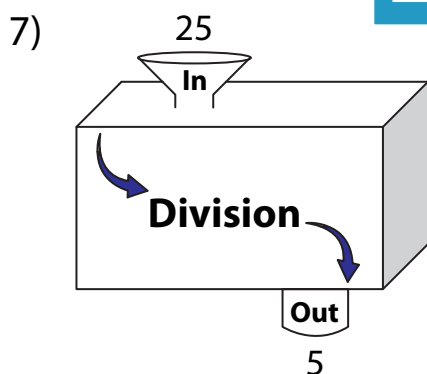


In		36
Out	7	



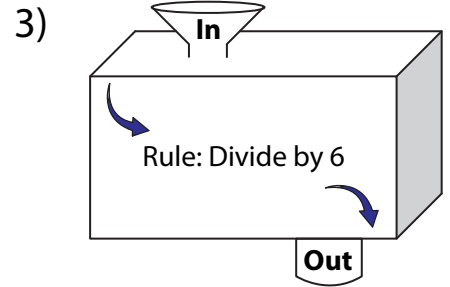
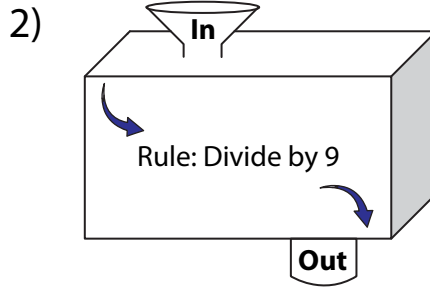
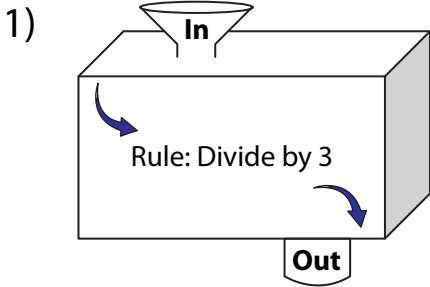
In		42	
Out	3		13

B) Write the rule.



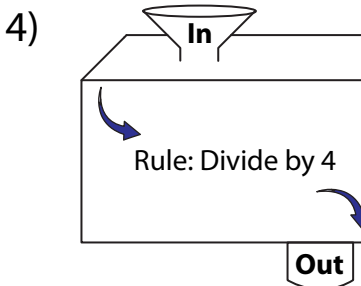
In and Out Boxes

A) Complete the in and out boxes using the given rule.

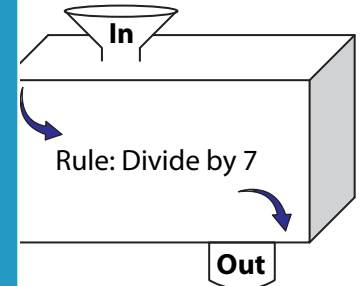


In	12	30
Out	4	10

In	30	60	90
Out	5	10	15



In	28	36
Out	7	9



In	21	42	91
Out	3	6	13

PREVIEW

Gain complete access to the largest collection of worksheets in all subjects!

Members, please log in to download this worksheet.

Not a member? Please sign up to gain complete access.

www.mathworksheets4kids.com

B) Write the rule.

