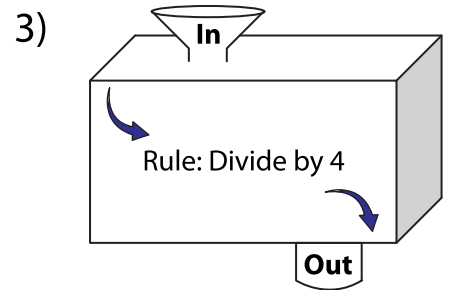
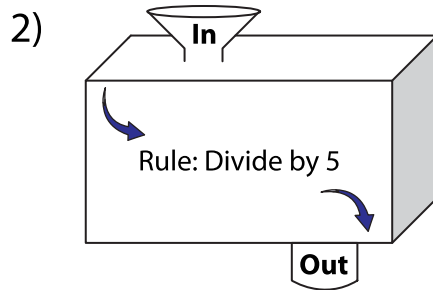
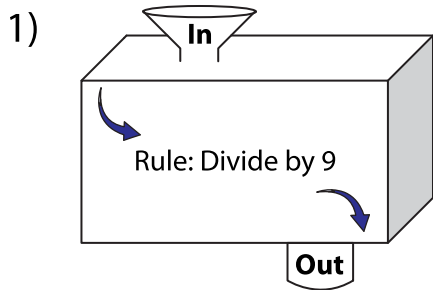


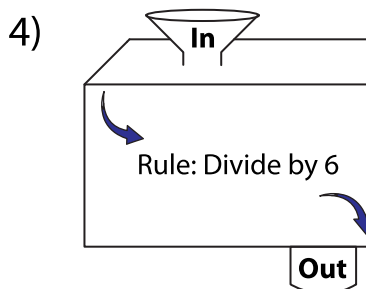
# In and Out Boxes

A) Complete the in and out boxes using the given rule.

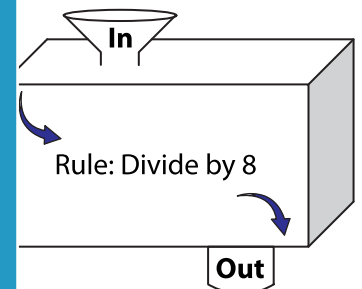


In	18	63	
Out			

In	12	32	60
Out			



In	48		
Out		13	



In	56		96
Out		9	

## PREVIEW

Gain complete access to the largest collection of worksheets in all subjects!

Members, please log in to download this worksheet.

Not a member? Please sign up to gain complete access.

[www.mathworksheets4kids.com](http://www.mathworksheets4kids.com)

B) Write the rule.

