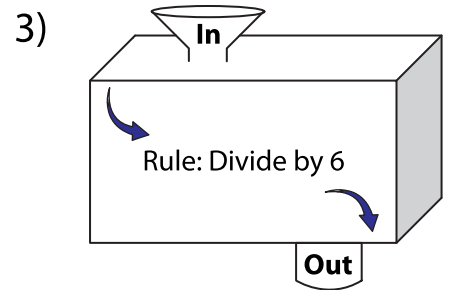
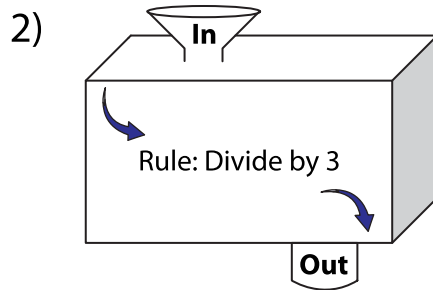
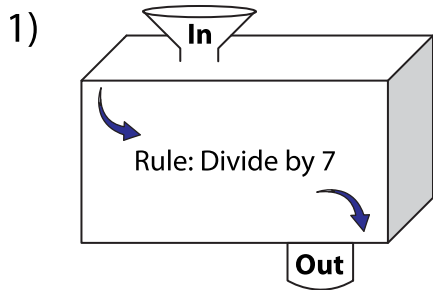


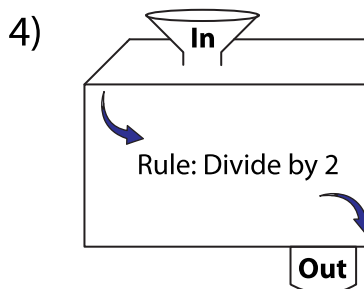
# In and Out Boxes

A) Complete the in and out boxes using the given rule.

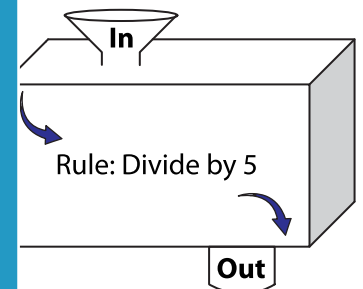


In	14	35	
Out			

In	24	42	54
Out			



In	10		
Out		11	



In	20		40
Out		7	

## PREVIEW

Gain complete access to the largest collection of worksheets in all subjects!

Members, please log in to download this worksheet.

Not a member? Please sign up to gain complete access.

[www.mathworksheets4kids.com](http://www.mathworksheets4kids.com)

B) Write the rule.

