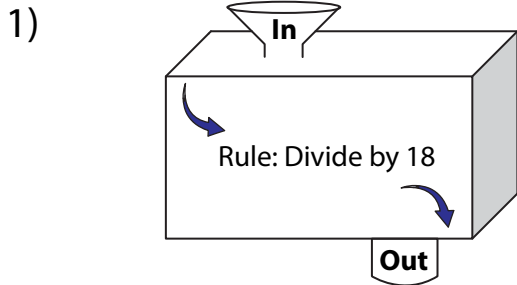
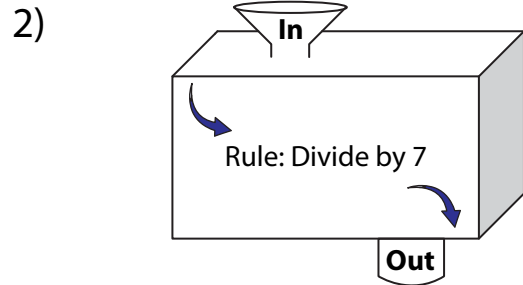


In and Out Boxes

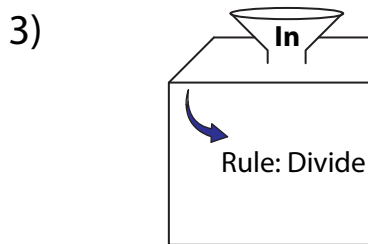
A) Complete the in and out boxes using the given rule.



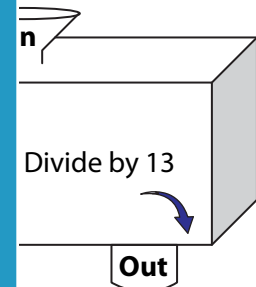
In	126	
Out		



	7	525	861
Out			



In	306
Out	



	624	832
Out		

PREVIEW

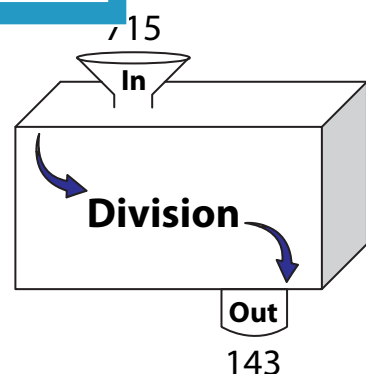
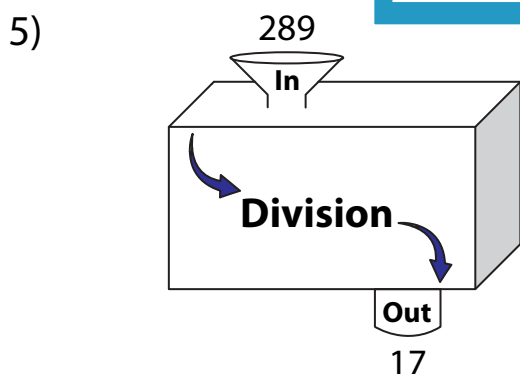
Gain complete access to the largest collection of worksheets in all subjects!

Members, please log in to download this worksheet.

Not a member? Please sign up to gain complete access.

www.mathworksheets4kids.com

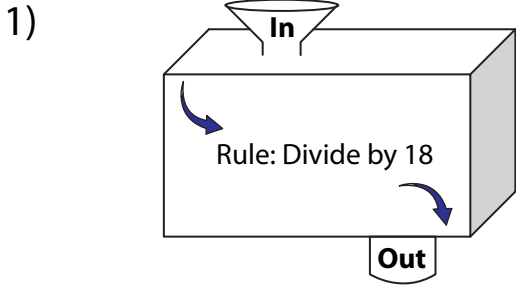
B) Write the rule.



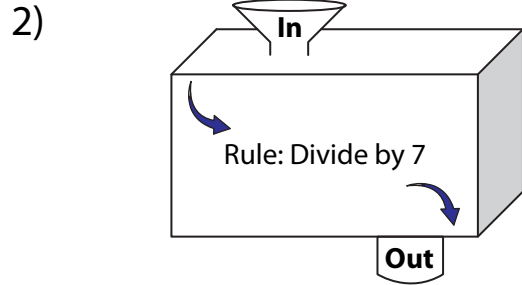
Name : _____

In and Out Boxes

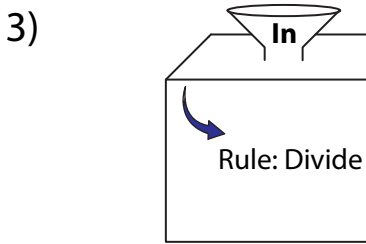
A) Complete the in and out boxes using the given rule.



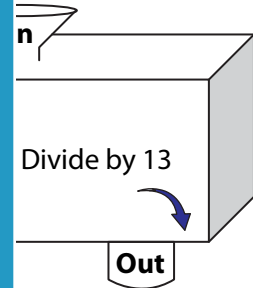
In	126	
Out	7	



	7	525	861
	1	75	123



In	306
Out	51



7	624	832
	48	64

PREVIEW

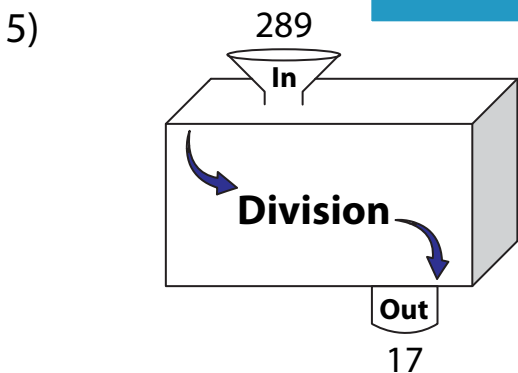
Gain complete access to the largest collection of worksheets in all subjects!

Members, please log in to download this worksheet.

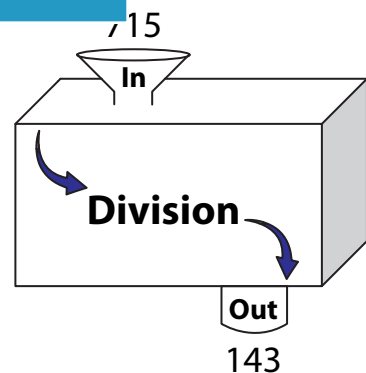
Not a member? Please sign up to gain complete access.

www.mathworksheets4kids.com

B) Write the rule.



Divide by 17



Divide by 5