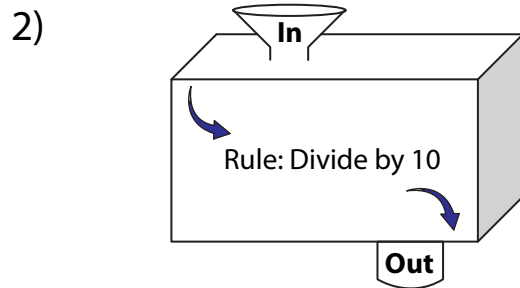
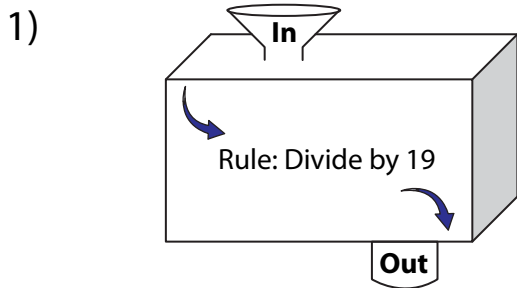


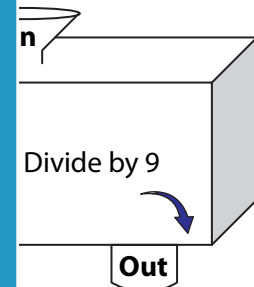
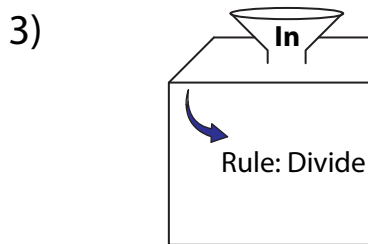
# In and Out Boxes

A) Complete the in and out boxes using the given rule.



<b>In</b>	285	
<b>Out</b>		

	70	680	790



<b>In</b>	
<b>Out</b>	9

7	972
99	

## PREVIEW

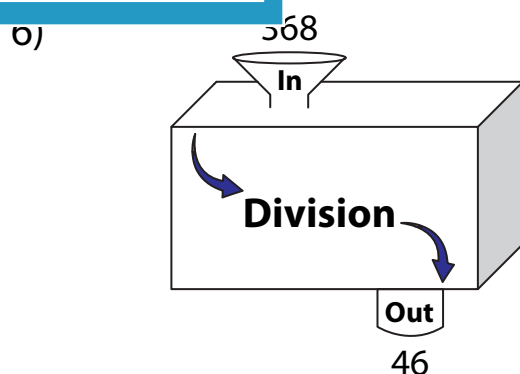
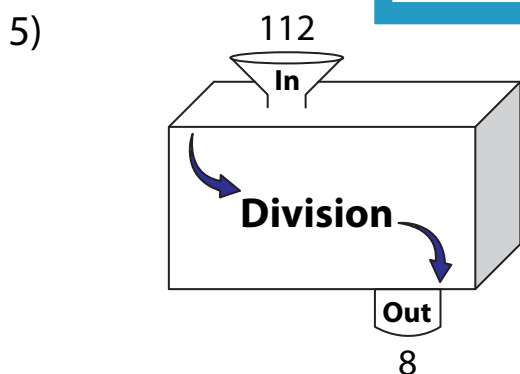
Gain complete access to the largest collection of worksheets in all subjects!

Members, please log in to download this worksheet.

Not a member? Please sign up to gain complete access.

[www.mathworksheets4kids.com](http://www.mathworksheets4kids.com)

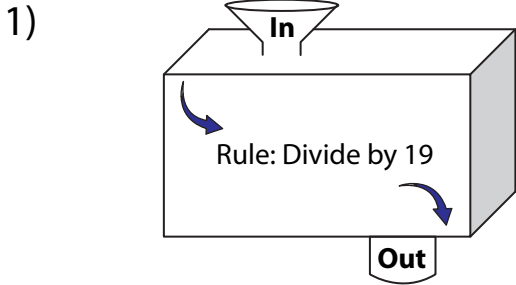
B) Write the rule.



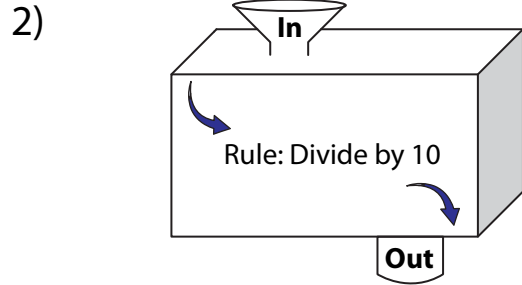
Name : \_\_\_\_\_

**In and Out Boxes**

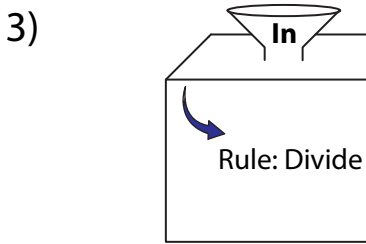
A) Complete the in and out boxes using the given rule.



In	285	
Out	<b>15</b>	



	70	680	790
	<b>7</b>	<b>68</b>	<b>79</b>



In	<b>108</b>
Out	9

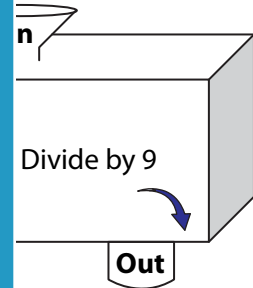
# PREVIEW

Gain complete access to the largest collection of worksheets in all subjects!

Members, please log in to download this worksheet.

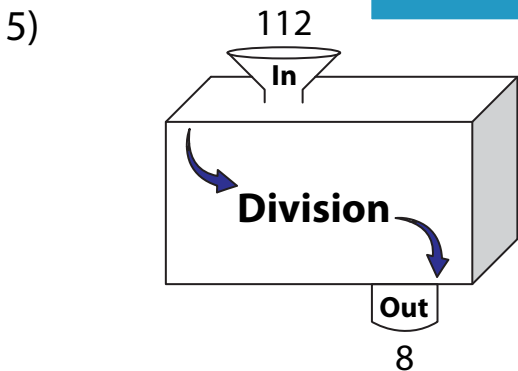
Not a member? Please sign up to gain complete access.

www.mathworksheets4kids.com

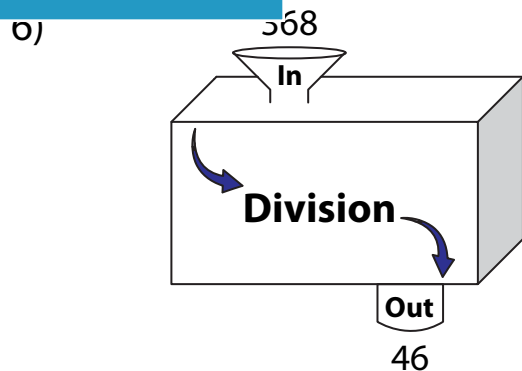


	7	<b>891</b>	972
	<b>3</b>	99	<b>108</b>

B) Write the rule.



**Divide by 14**



**Divide by 8**