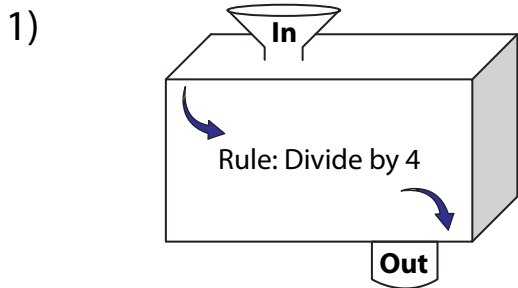
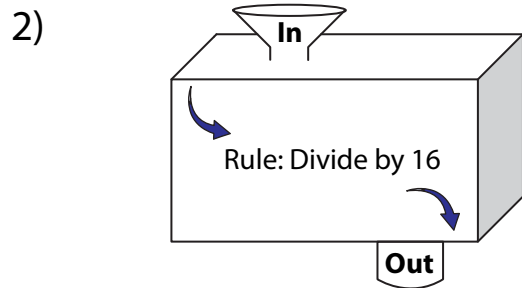


# In and Out Boxes

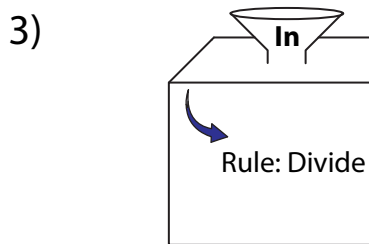
A) Complete the in and out boxes using the given rule.



<b>In</b>	340	
<b>Out</b>		



	4	416	960
<b>Out</b>			



<b>In</b>	
<b>Out</b>	25

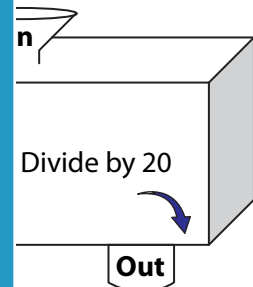
## PREVIEW

Gain complete access to the largest collection of worksheets in all subjects!

Members, please log in to download this worksheet.

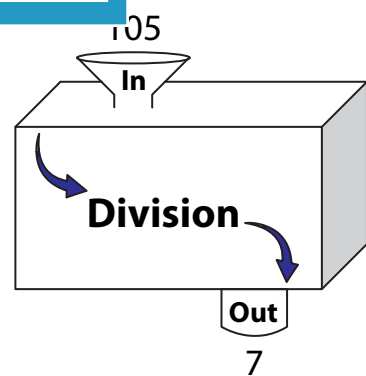
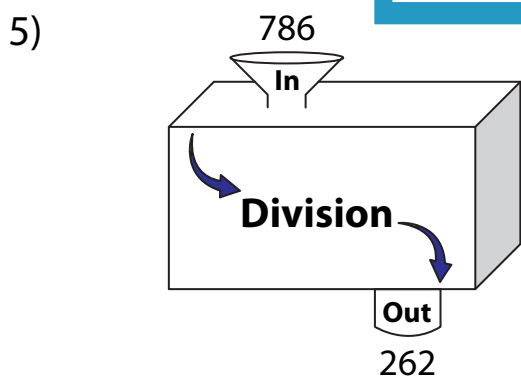
Not a member? Please sign up to gain complete access.

[www.mathworksheets4kids.com](http://www.mathworksheets4kids.com)



		520
<b>Out</b>	2	19

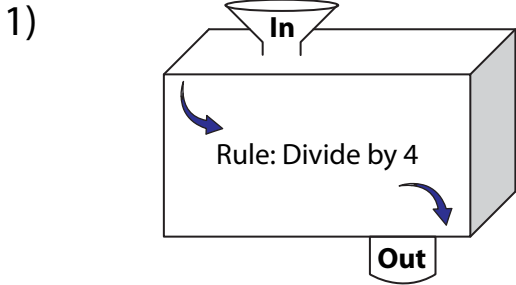
B) Write the rule.



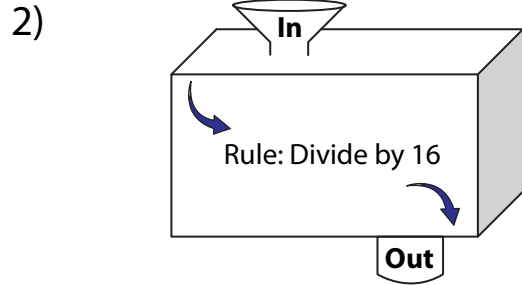
Name : \_\_\_\_\_

**In and Out Boxes**

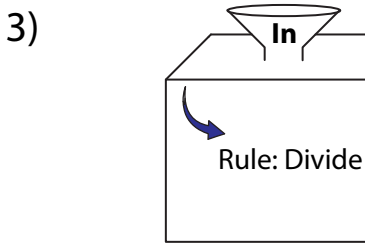
A) Complete the in and out boxes using the given rule.



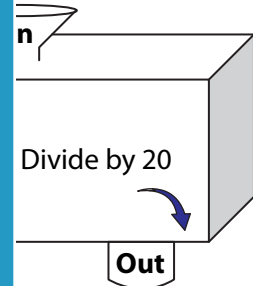
In	340
Out	<b>85</b>



4	416	960
	<b>26</b>	<b>60</b>



In	<b>275</b>
Out	25



40	<b>380</b>	520
2	19	<b>26</b>

**PREVIEW**

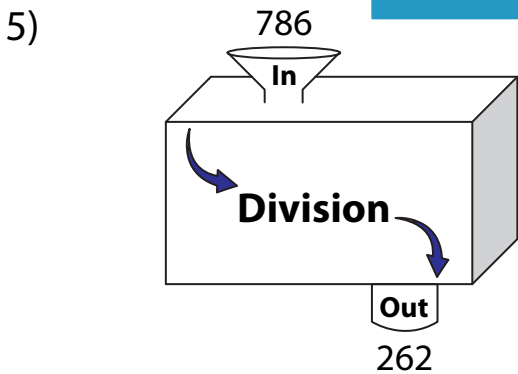
Gain complete access to the largest collection of worksheets in all subjects!

Members, please log in to download this worksheet.

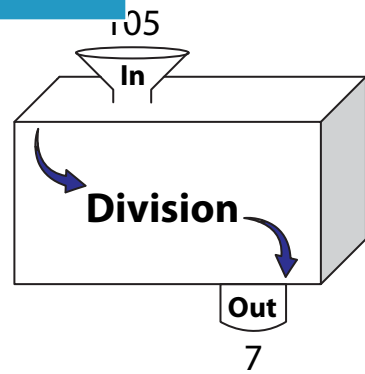
Not a member? Please sign up to gain complete access.

[www.mathworksheets4kids.com](http://www.mathworksheets4kids.com)

B) Write the rule.



**Divide by 3**



**Divide by 15**