


Name : _____

Division - Arrays

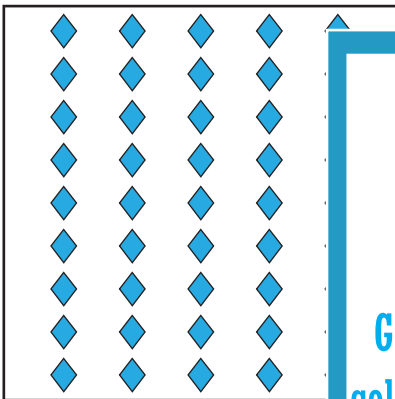


How many rows are there in the array? _____

How many columns are there in the array? _____

How many shapes are there in the array? _____

Write the division sentence that represents the array.

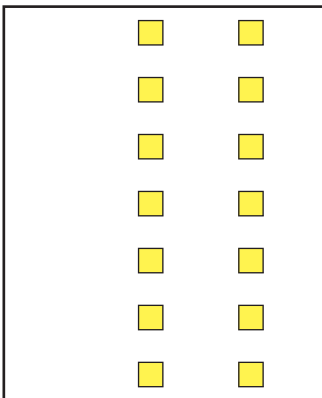


ay? _____

array? _____

array? _____

resents the array.



ay? _____

array? _____

array? _____

resents the array.


PREVIEW

Gain complete access to the largest collection of worksheets in all subjects!

Members, please log in to download this worksheet.

Not a member? Please sign up to gain complete access.

www.mathworksheets4kids.com



How many rows are there in the array? _____


How many columns are there in the array? _____

How many shapes are there in the array? _____

Write the division sentence that represents the array.

Name : _____

Division - Arrays



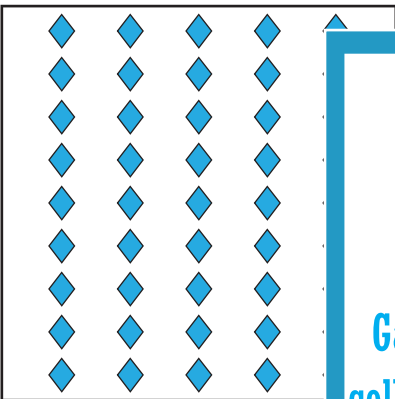
How many rows are there in the array? 8

How many columns are there in the array? 8

How many shapes are there in the array? 64

Write the division sentence that represents the array.

$64 \div 8 = 8$




How many rows are there in the array? 9

How many columns are there in the array? 5

How many shapes are there in the array? 45

Write the division sentence that represents the array.

$45 \div 9 = 5$




How many rows are there in the array? 7

How many columns are there in the array? 2

How many shapes are there in the array? 14

Write the division sentence that represents the array.

$14 \div 7 = 2$



How many rows are there in the array? 3

How many columns are there in the array? 4

How many shapes are there in the array? 12

Write the division sentence that represents the array.

$12 \div 4 = 3$ (or) $12 \div 3 = 4$

PREVIEW

Gain complete access to the largest collection of worksheets in all subjects!

Members, please log in to download this worksheet.

Not a member? Please sign up to gain complete access.

www.mathworksheets4kids.com