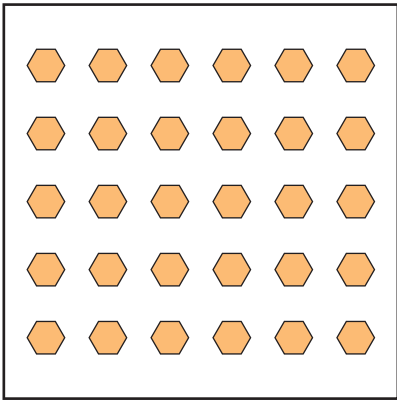


Name : _____

Division - Arrays




How many rows are there in the array? _____

How many columns are there in the array? _____

How many shapes are there in the array? _____

Write the division sentence that represents the array.




ay? _____

array? _____

array? _____

resents the array.



ay? _____

array? _____

array? _____

resents the array.


PREVIEW

Gain complete access to the largest collection of worksheets in all subjects!

Members, please log in to download this worksheet.

Not a member? Please sign up to gain complete access.

www.mathworksheets4kids.com



How many rows are there in the array? _____

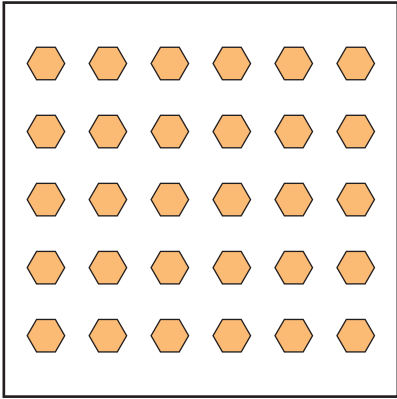
How many columns are there in the array? _____

How many shapes are there in the array? _____

Write the division sentence that represents the array.

Name : _____

Division - Arrays




How many rows are there in the array? 5

How many columns are there in the array? 6

How many shapes are there in the array? 30

Write the division sentence that represents the array.

$30 \div 6 = 5$ (or) $30 \div 5 = 6$




ay? 3

array? 3

array? 9

resents the array.



ay? 9

array? 7

array? 63

resents the array.

$\div 9 = 7$


PREVIEW

Gain complete access to the largest collection of worksheets in all subjects!

Members, please log in to download this worksheet.

Not a member? Please sign up to gain complete access.

www.mathworksheets4kids.com



How many rows are there in the array? 6

How many columns are there in the array? 4

How many shapes are there in the array? 24

Write the division sentence that represents the array.

$24 \div 4 = 6$ (or) $24 \div 6 = 4$