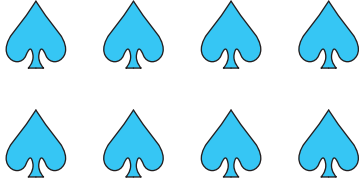


Division Sentence - Arrays


Complete each division sentence to describe the array.

1)




$$8 \div 2 = \square$$

2)




$$15 \div \square = 3$$

3)




$$\square \div 4 = 3$$

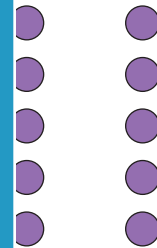


$$3 = \square$$

5)




$$12 \div \square = 2$$



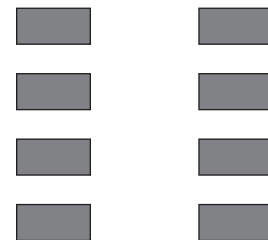
$$5 = 2$$

7)



$$4 \div 2 = \square$$

8)



$$8 \div \square = 4$$

PREVIEW

Gain complete access to the largest collection of worksheets in all subjects!

Members, please log in to download this worksheet.

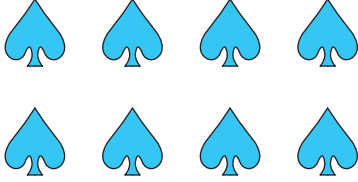
Not a member? Please sign up to gain complete access.

www.mathworksheets4kids.com

Division Sentence - Arrays


Complete each division sentence to describe the array.

1)




$$8 \div 2 = \boxed{4}$$

2)




$$15 \div \boxed{5} = 3$$

3)




$$\boxed{20} \div 4 = 5$$

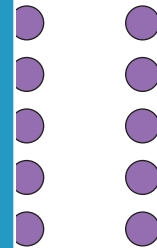


$$3 \times 2 = \boxed{6}$$

5)




$$12 \div \boxed{2} = 6$$



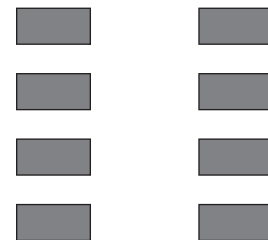
$$5 \times 2 = 10$$

7)



$$4 \div 2 = \boxed{2}$$

8)



$$8 \div \boxed{2} = 4$$

PREVIEW

Gain complete access to the largest collection of worksheets in all subjects!

Members, please log in to download this worksheet.

Not a member? Please sign up to gain complete access.

www.mathworksheets4kids.com