

Name : _____

Division - Arrays

Sheet 3

Draw an array for each division equation.

1) $15 \div 5 = 3$

2) $8 \div 2 = 4$

3) $20 \div 4 = 5$

4) $6 \div 2 = 3$

PREVIEW

Gain complete access to the largest
collection of worksheets in all subjects!

Members, please
log in to
download this
worksheet.

Not a member?
Please sign up to
gain complete
access.

www.mathworksheets4kids.com

Name : _____

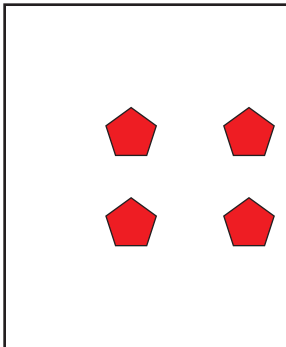
Division - Arrays

Draw an array for each division equation. (Drawings may vary)

1) $15 \div 5 = 3$



2) $8 \div 2 = 4$



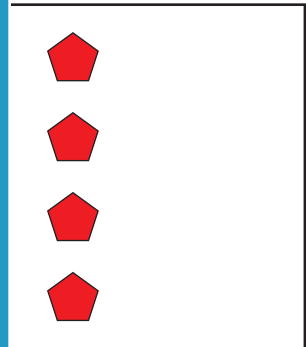
PREVIEW

Gain complete access to the largest collection of worksheets in all subjects!



Members, please log in to download this worksheet.

Not a member? Please sign up to gain complete access.

www.mathworksheets4kids.com



3) $20 \div 4 = 5$



4) $6 \div 2 = 3$

