

Name: \_\_\_\_\_

## Division - Bar Model

Sheet 3

1)  $21 \div 7 =$  \_\_\_\_\_

21						

2)  $45 \div 5 =$  \_\_\_\_\_

45				

3)  $28 \div 4 =$  \_\_\_\_\_


**PREVIEW**

Gain complete access to the largest collection of worksheets in all subjects!

Members, please log in to download this worksheet.

Not a member? Please sign up to gain complete access.

[www.mathworksheets4kids.com](http://www.mathworksheets4kids.com)

36			

5)  $10 \div 2 =$  \_\_\_\_\_


64			

7)  $56 \div 7 =$  \_\_\_\_\_

56						

8)  $12 \div 3 =$  \_\_\_\_\_

12		

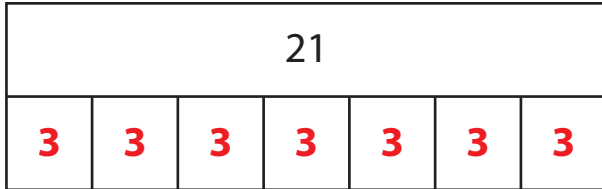
Name: \_\_\_\_\_

## Answer key

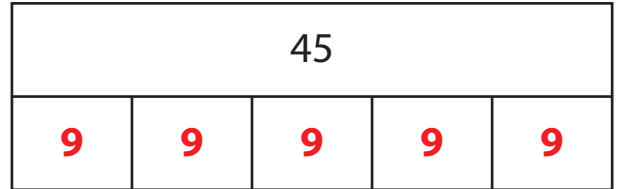
Sheet 3

### Division - Bar Model

1)  $21 \div 7 = \underline{3}$



2)  $45 \div 5 = \underline{9}$



3)  $28 \div 4 = \underline{7}$



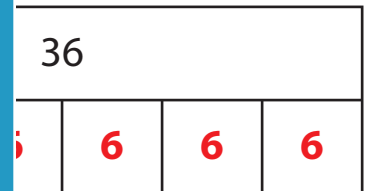
**PREVIEW**

Gain complete access to the largest collection of worksheets in all subjects!


Members, please log in to download this worksheet.

Not a member? Please sign up to gain complete access.

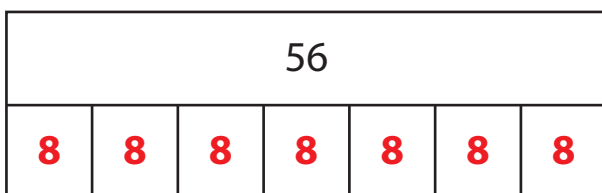
[www.mathworksheets4kids.com](http://www.mathworksheets4kids.com)



5)  $10 \div 2 = \underline{5}$



7)  $56 \div 7 = \underline{8}$



8)  $12 \div 3 = \underline{4}$

