

Name : _____

Representing Division


Sheet 1

Grouping Model

Array

$20 \div 4 =$

$20 \div 4 =$



PREVIEW

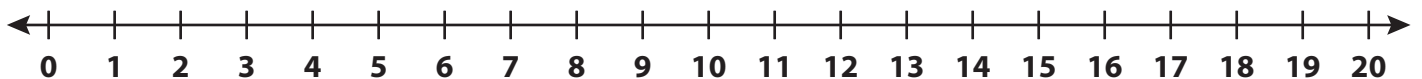
Gain complete access to the largest collection of worksheets in all subjects!

Members, please log in to download this worksheet.

Not a member? Please sign up to gain complete access.

www.mathworksheets4kids.com

$20 \div 4 =$



Name : _____

Answer key

Representing Division


Sheet 1

Grouping Model

Array

$20 \div 4 = 5$

$20 \div 4 = 5$



PREVIEW

Gain complete access to the largest collection of worksheets in all subjects!

Members, please log in to download this worksheet.

Not a member? Please sign up to gain complete access.

www.mathworksheets4kids.com

$20 \div 4 = 5$

