

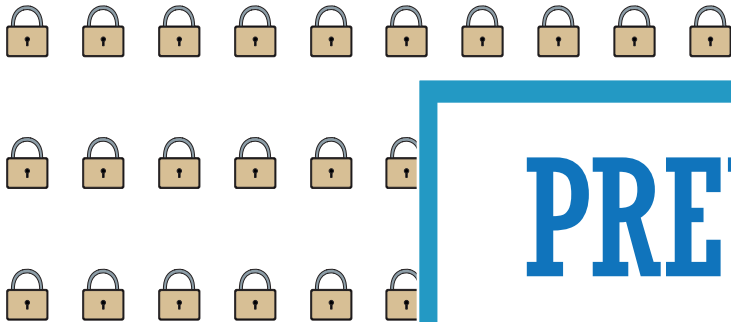
Name : _____

Representing Division

Sheet 3

Grouping Model

$30 \div 5 =$



Array

$30 \div 5 =$



PREVIEW

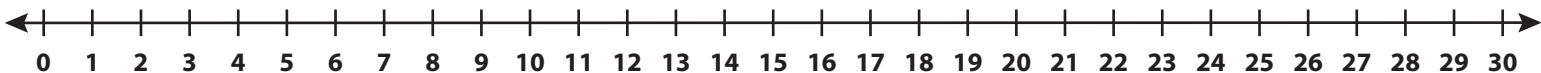
Gain complete access to the largest collection of worksheets in all subjects!

Members, please log in to download this worksheet.

Not a member? Please sign up to gain complete access.

www.mathworksheets4kids.com

$30 \div 5 =$



Name : _____

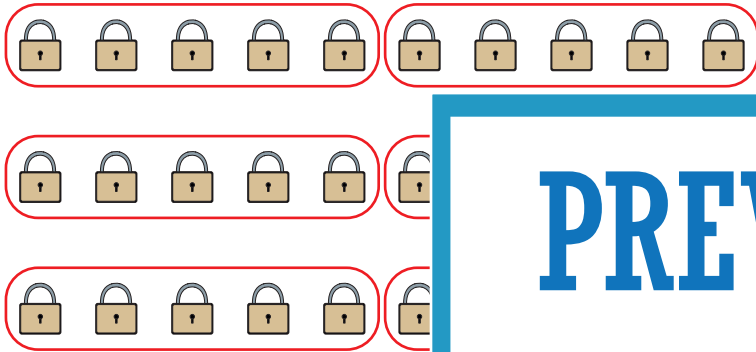
Answer key

Representing Division

Sheet 3

Grouping Model

$$30 \div 5 = 6$$



Array

$$30 \div 5 = 6$$



$$30 \div 5 = 6$$

PREVIEW

Gain complete access to the largest collection of worksheets in all subjects!

Members, please log in to download this worksheet.

Not a member? Please sign up to gain complete access.

www.mathworksheets4kids.com

