


Name : _____

Division Models

Sheet 1


Find the number of groups and complete the division sentences.

1)




$$20 \div 4 = \underline{\hspace{2cm}}$$

2)



$$12 \div 3 = \underline{\hspace{2cm}}$$

3)




$$15 \div 5 = \underline{\hspace{2cm}}$$

4)




$$12 \div 2 = \underline{\hspace{2cm}}$$

5)



$$36 \div 6 = \underline{\hspace{2cm}}$$

6)




$$40 \div 8 = \underline{\hspace{2cm}}$$

Division Models


Find the number of groups and complete the division sentences.

1)




$$20 \div 4 = \underline{5}$$

2)



$$12 \div 3 = \underline{4}$$

3)




$$15 \div 5 = \underline{3}$$

4)




$$12 \div 2 = \underline{6}$$

5)



$$36 \div 6 = \underline{6}$$

6)



$$40 \div 8 = \underline{5}$$