

Division Models


Find the number of groups and complete the division sentences.

1)



$$27 \div 9 = \underline{\hspace{2cm}}$$

2)



3.

PREVIEW

Gain complete access to the largest
collection of worksheets in all subjects!

Members, please
log in to
download this
worksheet.

Not a member?
Please sign up to
gain complete
access.

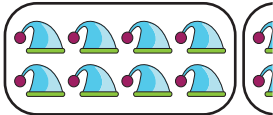
www.mathworksheets4kids.com

3)



1.

4)



3.

5)



$$15 \div 3 = \underline{\hspace{2cm}}$$

6)



$$20 \div 5 = \underline{\hspace{2cm}}$$

Division Models


Find the number of groups and complete the division sentences.

1)



$$27 \div 9 = \underline{3}$$

2)



3.

PREVIEW

Gain complete access to the largest
collection of worksheets in all subjects!

Members, please
log in to
download this
worksheet.

Not a member?
Please sign up to
gain complete
access.

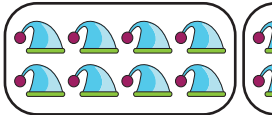
www.mathworksheets4kids.com

3)



1.

4)



3.

5)



$$15 \div 3 = \underline{5}$$

6)



$$20 \div 5 = \underline{4}$$