

Division Models

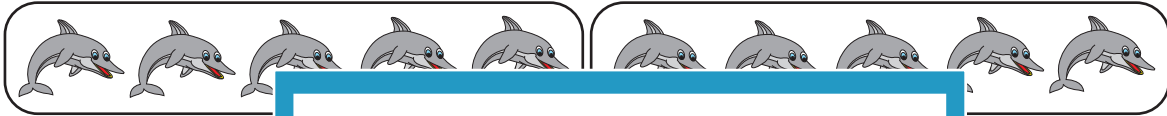
Find the number of groups and complete the division sentences.

1)



$$30 \div 6 = \underline{\hspace{2cm}}$$

2)




10

3)



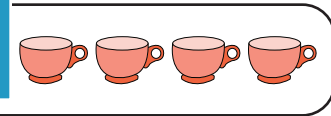

14

4)




24

5)



$$16 \div 8 = \underline{\hspace{2cm}}$$

6)



$$28 \div 7 = \underline{\hspace{2cm}}$$

PREVIEW

Gain complete access to the largest
collection of worksheets in all subjects!

Members, please
log in to
download this
worksheet.

Not a member?
Please sign up to
gain complete
access.

www.mathworksheets4kids.com

Division Models

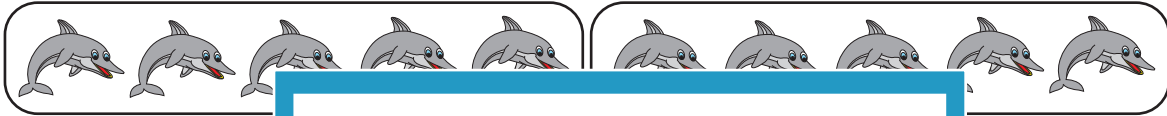
Find the number of groups and complete the division sentences.

1)




$$30 \div 6 = \underline{5}$$

2)



10


3)



10

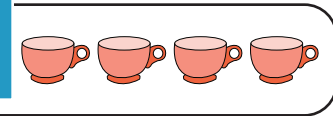



4)




20

5)



$$16 \div 8 = \underline{2}$$

6)



$$28 \div 7 = \underline{4}$$

PREVIEW

Gain complete access to the largest collection of worksheets in all subjects!

Members, please log in to download this worksheet.

Not a member? Please sign up to gain complete access.

www.mathworksheets4kids.com