

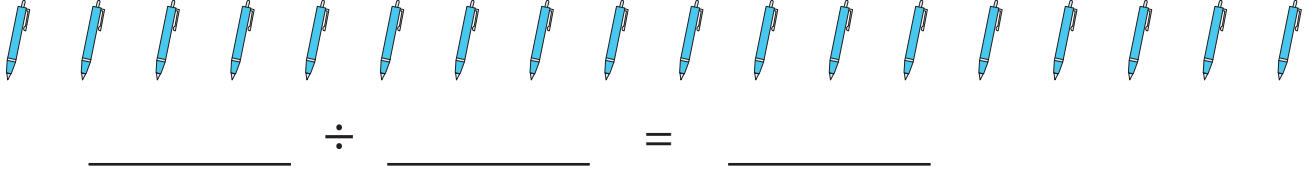
Name : _____

Division Models

Sheet 1

Divide the objects into indicated groups and write the division sentences.

1) Divide into groups of 2.



2) Divide into groups of 5.



3) Divide into groups



4) Divide into groups

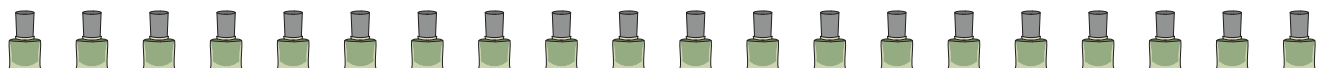


5) Divide into groups



_____ ÷ _____ = _____

6) Divide into groups of 4.



_____ ÷ _____ = _____

PREVIEW

Gain complete access to the largest collection of worksheets in all subjects!

Members, please log in to download this worksheet.

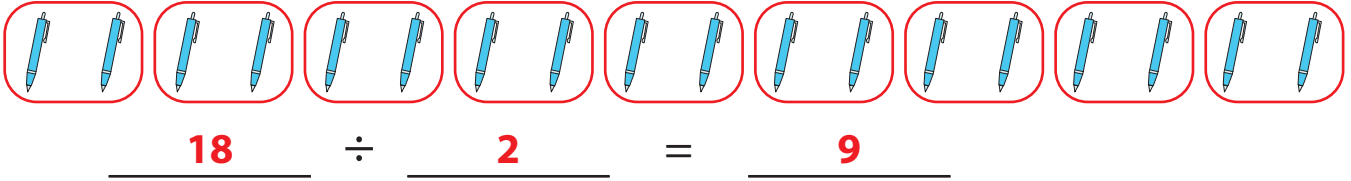
Not a member? Please sign up to gain complete access.

www.mathworksheets4kids.com

Division Models

Divide the objects into indicated groups and write the division sentences.

1) Divide into groups of 2.



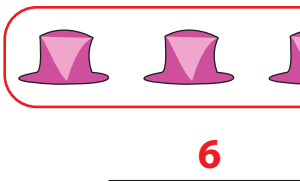
2) Divide into groups of 5.



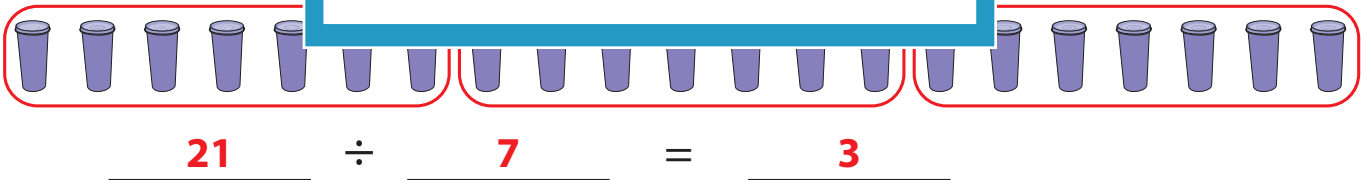
3) Divide into groups



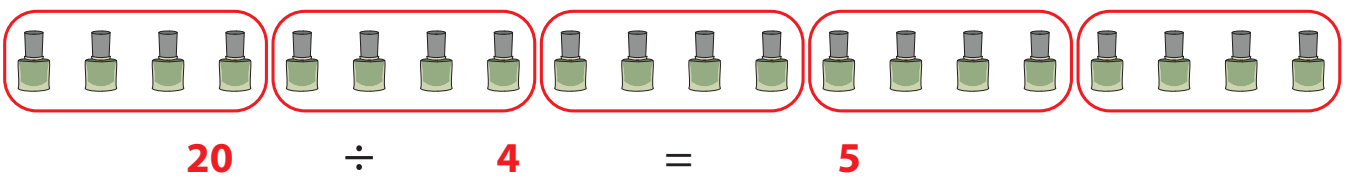
4) Divide into groups



5) Divide into groups



6) Divide into groups of 4.



PREVIEW

Gain complete access to the largest
collection of worksheets in all subjects!

Members, please
log in to
download this
worksheet.

Not a member?
Please sign up to
gain complete
access.

www.mathworksheets4kids.com