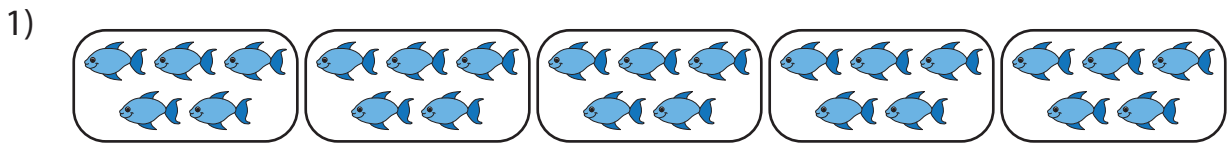



Division Models

A) Write the division sentence that describes each model.



_____ ÷ _____ = _____







B) Draw equal groups

1) $14 \div 7 =$ _____

2) $27 \div 9 =$ _____

PREVIEW

Gain complete access to the largest collection of worksheets in all subjects!

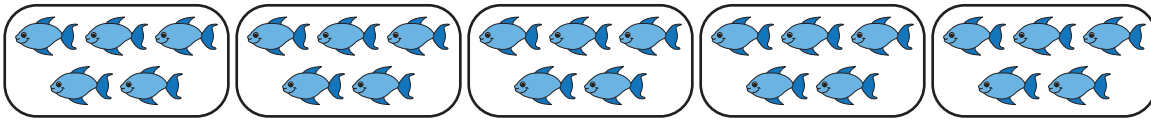
Members, please log in to download this worksheet.

Not a member? Please sign up to gain complete access.


www.mathworksheets4kids.com

Division Models


A) Write the division sentence that describes each model.

1) 

$$\underline{25} \div \underline{5} = \underline{5}$$

2) 

$$\underline{48}$$

3) 

$$\underline{24}$$

4) 

$$\underline{10}$$

PREVIEW


Gain complete access to the largest collection of worksheets in all subjects!

Members, please log in to download this worksheet.

Not a member? Please sign up to gain complete access.

www.mathworksheets4kids.com

B) Draw equal groups (Drawings may vary)

1) $14 \div 7 =$ _____


2) $27 \div 9 =$ 3
