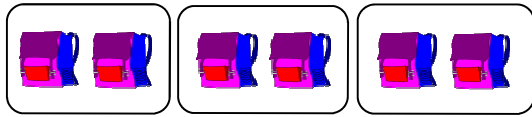


Division Facts


Sheet 1

Example:


Write division sentence:



$$\boxed{6} \div \boxed{2} = \boxed{3}$$



$$\boxed{} \div \boxed{} = \boxed{}$$



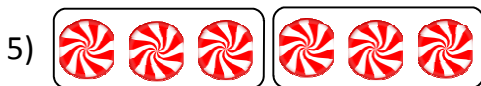
$$\boxed{} \div \boxed{} = \boxed{}$$



$$\boxed{} \div \boxed{} = \boxed{}$$



$$\boxed{} \div \boxed{} = \boxed{}$$



$$\boxed{} \div \boxed{} = \boxed{}$$




$$\boxed{} \div \boxed{} = \boxed{}$$



$$\boxed{} \div \boxed{} = \boxed{}$$



$$\boxed{} \div \boxed{} = \boxed{}$$



$$\boxed{} \div \boxed{} = \boxed{}$$



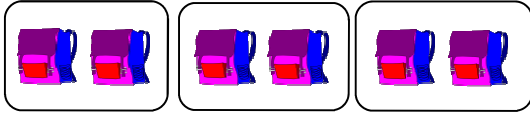
$$\boxed{} \div \boxed{} = \boxed{}$$

Answer key**Division Facts**


Sheet 1

Example:


Write division sentence:



$$6 \div 2 = 3$$



$$8 \div 4 = 2$$



$$15 \div 5 = 3$$



$$9 \div 3 = 3$$



$$4 \div 2 = 2$$



$$6 \div 3 = 2$$




$$8 \div 2 = 4$$



$$10 \div 5 = 2$$



$$12 \div 6 = 2$$



$$10 \div 2 = 5$$



$$12 \div 4 = 3$$