


Name : _____

Division Table - 15



15

15

$$15 \div 15 =$$

$$30 \div 15 =$$

PREVIEW

Access the largest collection of worksheets for just **\$19.95** per year!

Members, please
log in to
download this
worksheet.

Log in

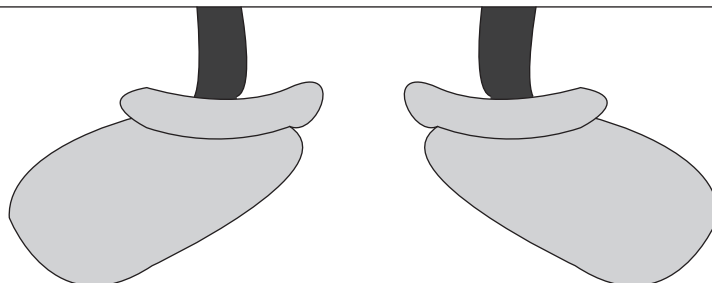
Not a member?
Please sign up to
gain complete
access.

Sign up

www.mathworksheets4kids.com

$$165 \div 15 =$$


$$180 \div 15 =$$



Name : _____

Answer key

Division Table - 15



15

15

$$15 \div 15 = 1$$

$$30 \div 15 = 2$$

PREVIEW

Access the largest collection of worksheets for just **\$19.95** per year!

Members, please log in to download this worksheet.

Log in

Not a member? Please sign up to gain complete access.

Sign up

www.mathworksheets4kids.com

$$165 \div 15 = 11$$

$$180 \div 15 = 12$$

