




Name : _____

Division Table - 25



$$25 \div 25 =$$

$$50 \div 25 =$$

PREVIEW

Gain complete access to the largest collection of worksheets in all subjects!

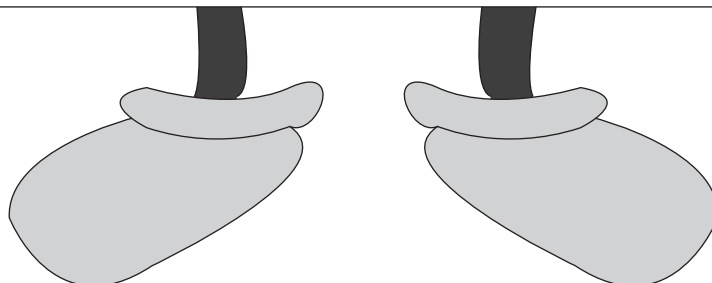
Members, please log in to download this worksheet.

Not a member? Please sign up to gain complete access.

www.mathworksheets4kids.com

$$275 \div 25 =$$




$$300 \div 25 =$$



Name : _____

Answer key

Division Table - 25



$$25 \div 25 = 1$$

$$50 \div 25 = 2$$

PREVIEW

Gain complete access to the largest collection of worksheets in all subjects!

Members, please log in to download this worksheet.

Not a member? Please sign up to gain complete access.

www.mathworksheets4kids.com

$$275 \div 25 = 11$$

$$300 \div 25 = 12$$

