


Name : _____

Division Table - 3



$$3 \div 3 =$$

$$6 \div 3 =$$

PREVIEW

Gain complete access to the largest collection of worksheets in all subjects!

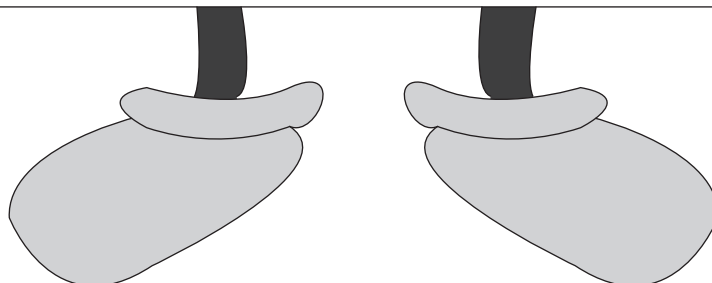
Members, please log in to download this worksheet.

Not a member? Please sign up to gain complete access.

www.mathworksheets4kids.com

$$33 \div 3 =$$


$$36 \div 3 =$$



Name : _____

Answer key

Division Table - 3



$$3 \div 3 = 1$$

$$6 \div 3 = 2$$

PREVIEW

Gain complete access to the largest collection of worksheets in all subjects!

Members, please log in to download this worksheet.

Not a member? Please sign up to gain complete access.

www.mathworksheets4kids.com

$$33 \div 3 = 11$$

$$36 \div 3 = 12$$

