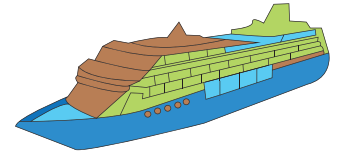


Name : _____

Division

with remainder: S3

- 1) A small cruise liner employs 77 crew members. If 3 members share a cabin each, how many cabins are required to accommodate the crew? How many more crew members remain to be lodged?



- 2) Grace uses 66 glass-contained candles as centerpieces for a wedding reception. If they are to be spread out on 11 tables, how many candles will each table be decorated with?

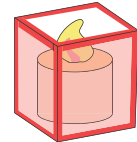
PREVIEW

Gain complete access to the largest collection of worksheets in all subjects!

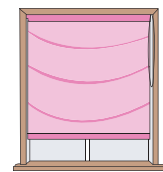
Members, please log in to download this worksheet.

Not a member? Please sign up to gain complete access.

www.mathworksheets4kids.com



- 3) Amarise bought 12 windows for her house. How many windows are left unused?



- 4) Mrs. Fisher buys 120 cookies to be distributed equally among 5 grandchildren. How many cookies are distributed to each grandchild? How many cookies remain?



- 5) Ms. Stevens has 34 photo frames that need to be spread equally across the portico, foyer, and hall of her house. How many photo frames were put up in each of the three areas of the house? How many remain to be hung?



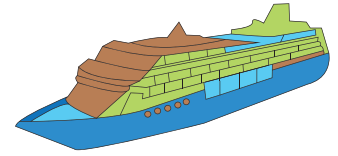
Name : _____

Answer Key

Division

with remainder: S3

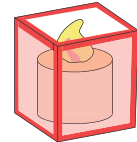
- 1) A small cruise liner employs 77 crew members. If 3 members share a cabin each, how many cabins are required to accommodate the crew? How many more crew members remain to be lodged?



25 cabins; 2 members

- 2) Grace uses 66 glass-contained candles as centerpieces for a wedding reception. If they are to be spread out on 10 tables, how many candles will each table be decorated with without being placed?

7 centerpieces



- 3) Amarise bought 12 windows for her house. How many windows are left unused?

2 blinds

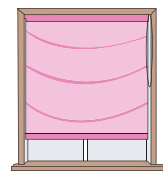
Gain complete access to the largest collection of worksheets in all subjects!

Members, please log in to download this worksheet.

Not a member? Please sign up to gain complete access.

www.mathworksheets4kids.com

- 4) Mrs. Fisher buys 12 windows for her house. How many windows are left unused?



- 5) Mrs. Fisher buys 12 windows for her house. How many windows are left unused?

6 copies; 6 copies

- 6) Ms. Stevens has 34 photo frames that need to be spread equally across the portico, foyer, and hall of her house. How many photo frames were put up in each of the three areas of the house? How many remain to be hung?



- 7) Ms. Stevens has 34 photo frames that need to be spread equally across the portico, foyer, and hall of her house. How many photo frames were put up in each of the three areas of the house? How many remain to be hung?



11 photo frames; 1 photo frame