


Name : \_\_\_\_\_

## Division

without remainder: S3

- 1) A recipe calls for 80 pounds of apples to prepare 8 gallons of hard cider. How many pounds of apples is required to make one gallon of hard cider?

\_\_\_\_\_



- 2) The HQ of a company places an order for 99 artificial Christmas trees to be distributed equally to 9 office locations. How many Christmas trees will each office location receive?

\_\_\_\_\_


**PREVIEW**

Gain complete access to the largest collection of worksheets in all subjects!

Members, please log in to download this worksheet.

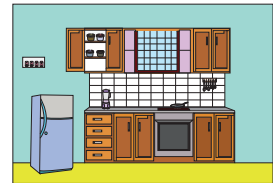
Not a member? Please sign up to gain complete access.

[www.mathworksheets4kids.com](http://www.mathworksheets4kids.com)




- 3) Joanne has 4 glass cabinets and 12 shelves. How many racks does each glass cabinet have?

\_\_\_\_\_



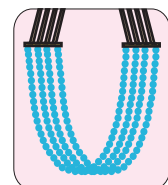
- 4) Eric took part in a hot dog eating contest and ate 24 hot dogs in 8 minutes. How many hot dogs did he eat per minute?

\_\_\_\_\_



- 5) Rebecca used 84 acrylic beads to make a multistrand necklace for her daughter. If the necklace has four equal strands in all, how many beads does each strand hold?

\_\_\_\_\_



Name : \_\_\_\_\_


## Answer Key

### Division

without remainder: S3


- 1) A recipe calls for 80 pounds of apples to prepare 8 gallons of hard cider. How many pounds of apples is required to make one gallon of hard cider?

10 pounds



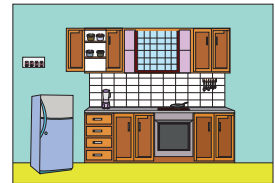
- 2) The HQ of a company places an order for 99 artificial Christmas trees to be distributed equally among 9 office locations. How many Christmas trees will each office location receive?

11 christmas




- 3) Joanne has 4 glass cabinets and 24 glass racks. How many racks does each glass cabinet hold?

6 racks



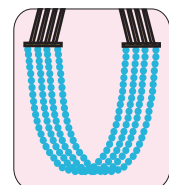
- 4) Eric took part in a hot dog eating contest and ate 40 hot dogs in 8 minutes. How many hot dogs did he eat per minute?

5 hot dogs



- 5) Rebecca used 84 acrylic beads to make a multistrand necklace for her daughter. If the necklace has four equal strands in all, how many beads does each strand hold?

21 beads



**PREVIEW**

Gain complete access to the largest collection of worksheets in all subjects!

Members, please log in to download this worksheet.

Not a member? Please sign up to gain complete access.

[www.mathworksheets4kids.com](http://www.mathworksheets4kids.com)