


Name : _____


Division

3-digit by 1-digit: S3

- 1) William purchased a bag of dry food for his Labrador. It contains approximately 198 cups of dry food. If the dog consumes an average of 2 cups a day, how many days will the bag of dry food last?



- 2) The Jersey cows in a dairy farm yield 420 gallons of milk every day. Each cow yields 6 gallons of milk. How many cows are reared on the farm?



- 3) A school cafeteria serves 120 sandwiches for students on Monday. If each student eats 2 sandwiches, how many sandwiches are up for grabs?

Gain complete access to the largest collection of worksheets in all subjects!

Members, please log in to download this worksheet.

Not a member? Please sign up to gain complete access.



- 4) Janice buys 102 candy bars. If she gives 3 candy bars to each of her 12 nieces, how many candy bars will she have left?

www.mathworksheets4kids.com



- 5) If John spends an average of \$168 every quarter towards water and sewer bill, how much is he charged every month?

GALLONS	WATER	SEWER
XXX	YY	
XXX	YY	
XXX	YY	ZZZZ
TOTAL CHARGES	YY	ZZZZ

Name : _____


Answer Key

Division

3-digit by 1-digit: S3

- 1) William purchased a bag of dry food for his Labrador. It contains approximately 198 cups of dry food. If the dog consumes an average of 2 cups a day, how many days will the bag of dry food last?

99 days



- 2) The Jersey cows in a dairy farm yield 420 gallons of milk every day. Each cow yields 6 gallons of milk. How many Jersey cows are reared on the farm?

70 Jersey cows


PREVIEW

Gain complete access to the largest collection of worksheets in all subjects!

Members, please log in to download this worksheet.

Not a member? Please sign up to gain complete access.

www.mathworksheets4kids.com



- 3) A school cafeteria has 12 tables. Each table has 4 chairs. If each table is set for 8 students, how many students can sit at the tables on Monday. If each student has 2 sandwiches, how many sandwiches are up for grabs?

322 lunch sandwiches



- 4) Janice buys 102 boxes of candy bars. Each box contains 17 candy bars. How many candy bars will she have?

17 candy bars



- 5) If John spends an average of \$168 every quarter towards water and sewer bill, how much is he charged every month?

\$56

GALLONS	WATER	SEWER
XXX	YY	
XXX	YY	
XXX	YY	ZZZZ
TOTAL CHARGES	YY	ZZZZ