


Name : _____


Division

4-digit/ 5-digit by 1-digit: S2

- 1) Five making lines in a chocolate factory can churn out 10,000 tons of liquid chocolate in a year. How many tons of liquid chocolate can one making line in the chocolate factory produce in a year?



- 2) The Disney's All-Star Movies Resort at Orlando, FL has a total of 1,920 rooms spread over four floors.



- 3) Heather installed the month of Ju electricity per w

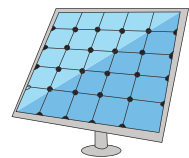
Gain complete access to the largest collection of worksheets in all subjects!

Members, please log in to download this worksheet.

Not a member? Please sign up to gain complete access.


www.mathworksheets4kids.com

tion of electricity in the consumption of




- 4) The Big Bang Th screens. How ma

ually spread over 9



- 5) Mike, John and Ryan went on a three-day trip to Atlantic City. Mike won \$93,381 at the slot machine in the airport. If Mike decides to split the money equally with his friends, what share will each person get?




Name : _____

Answer Key

Division


4-digit/ 5-digit by 1-digit: S2

- 1) Five making lines in a chocolate factory can churn out 10,000 tons of liquid chocolate in a year. How many tons of liquid chocolate can one making line in the chocolate factory produce in a year?



2,000 tons of liquid chocolate

- 2) The Disney's All-Star Movies Resort at Orlando, FL has a total of 1,920 rooms spread over four floors.

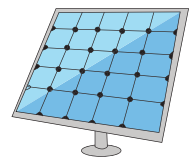


480

- 3) Heather installed solar panels on her house. She used 480 kilowatt-hours of electricity per week.

Gain complete access to the largest collection of worksheets in all subjects!

tion of electricity in the consumption of




30

- 4) The Big Bang Theory has 240 screens. How many seats are there in each screen?

Members, please log in to download this worksheet.


Not a member? Please sign up to gain complete access.

ually spread over 9



240 seats

- 5) Mike, John and Ryan went on a three-day trip to Atlantic City. Mike won \$93,381 at the slot machine in the airport. If Mike decides to split the money equally with his friends, what share will each person get?



\$31,127