


Name : _____

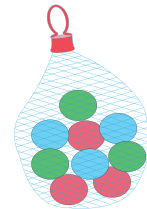
Division

Sheet 2

- 1) Gretchen has a deadline of 5 days to complete a project. She estimates that she would require a total of 30 hours to complete the project. How many hours will she be required to work on a daily basis to complete the project on time?



- 2) Graham shares a pack of twenty-four marbles among five of his friends and himself. How many marbles does each person get?

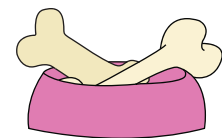


- 3) Rebecca, a dog lover, has 24 bones. She divides them equally by placing them into 6 bowls. How many bones did each of the bowls contain?

Gain complete access to the largest collection of worksheets in all subjects!

Members, please log in to download this worksheet.

Not a member? Please sign up to gain complete access.

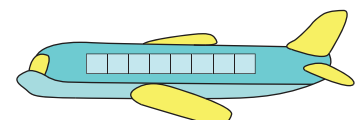


- 4) Henry is employed for 40 hours a week. If he works for eight hours of work, how much money does he earn?

www.mathworksheets4kids.com



- 5) The first class section of an airplane has a total seating capacity of 24 passengers. How many seats can be found in a row, if they are divided into 4 columns?



Name : _____


Answer Key

Division

Sheet 2

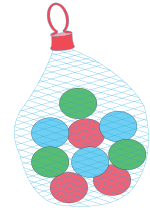
- 1) Gretchen has a deadline of 5 days to complete a project. She estimates that she would require a total of 30 hours to complete the project. How many hours will she be required to work on a daily basis to complete the project on time?

6 hours



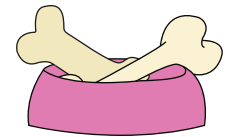
- 2) Graham shares a pack of twenty-four marbles among five of his friends and himself. How many marbles did each friend get?

4 marbles



- 3) Rebecca, a dog lover, has 40 bones and splits them equally by placing them in 5 bowls. How many bones did each bowl have?

8 bones



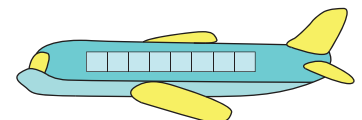
- 4) Henry is employed for 40 hours a week. If he works for 8 hours a day, how much money does he earn in a week?

\$10



- 5) The first class section of an airplane has a total seating capacity of 24 passengers. How many seats can be found in a row, if they are divided into 4 columns?

6 seats in a row



PREVIEW

Gain complete access to the largest collection of worksheets in all subjects!

Members, please log in to download this worksheet.

Not a member? Please sign up to gain complete access.

www.mathworksheets4kids.com