


Name : _____




Easter Egg Hunt ~ Line Plot



Mrs. Anne organized an Easter egg hunt. 24 children took part in it. The data represents the number of eggs gathered by each child. Make a line plot to represent the data.

12	15	13	12
10	12	14	10
15	11	12	14
10	14	11	12
14	11	13	12
11	13	12	12




PREVIEW

Gain complete access to the largest collection of worksheets in all subjects!

Members, please log in to download this worksheet.

Not a member? Please sign up to gain complete access.

www.mathworksheets4kids.com



Number of eggs gathered