

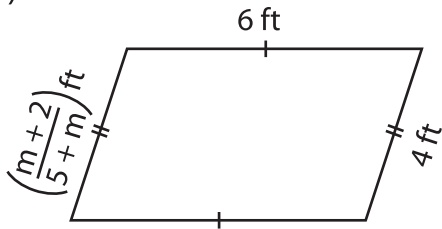
Name : _____

Multi-Step Equations: Shapes

Type 1: S1

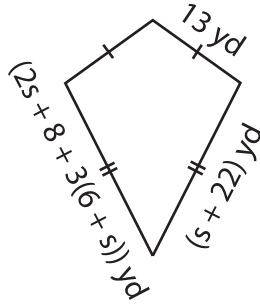
Find the unknown value given in each shape.

1)



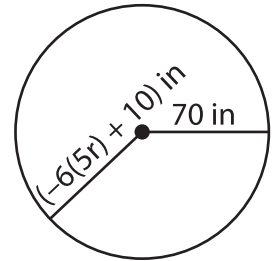
$m =$ _____

2)



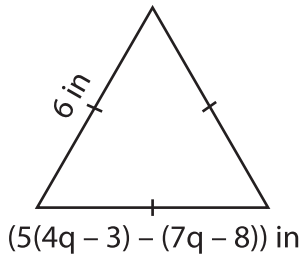
$s =$ _____

3)



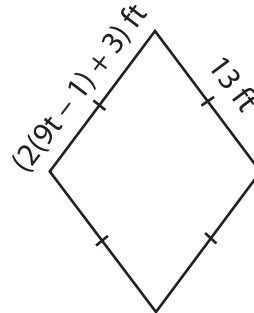
$r =$ _____

4)



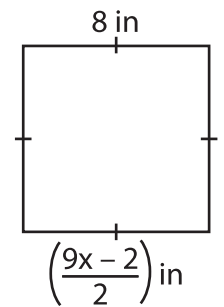
$q =$ _____

5)



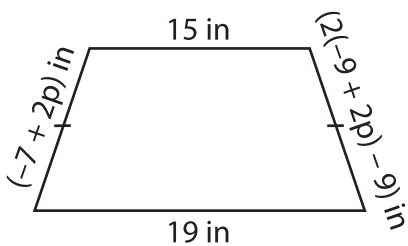
$t =$ _____

6)



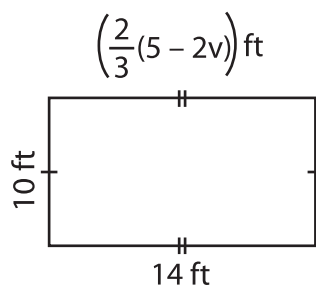
$x =$ _____

7)



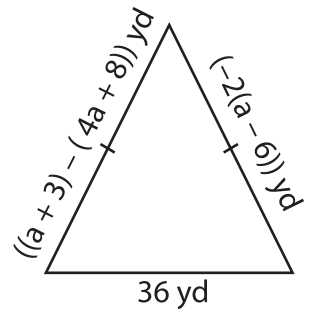
$p =$ _____

8)



$v =$ _____

9)



$a =$ _____