

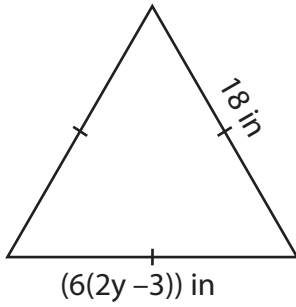
Name : _____

Multi-Step Equations: Shapes

Type 1: S2

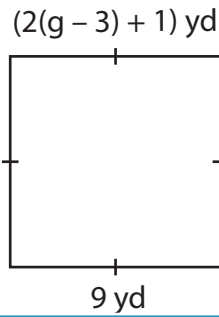
Find the unknown value given in each shape.

1)

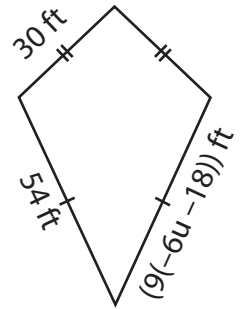


$y =$ _____

2)

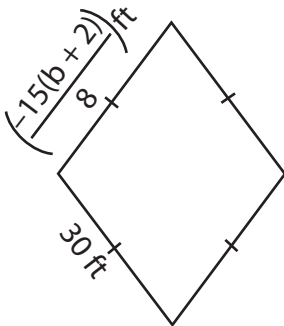


3)



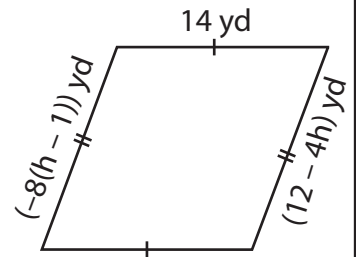
$u =$ _____

4)



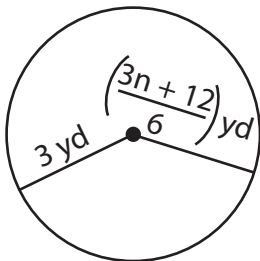
$b =$ _____

6)



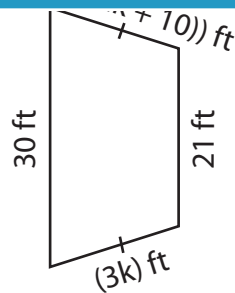
$h =$ _____

7)

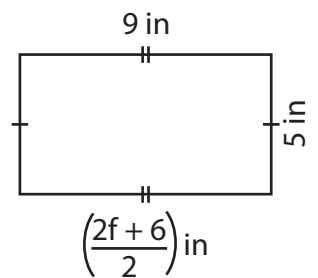


$n =$ _____

9)



$k =$ _____



$f =$ _____

PREVIEW

Gain complete access to the largest collection of worksheets in all subjects!

Members, please log in to download this worksheet.

Not a member? Please sign up to gain complete access.

www.mathworksheets4kids.com

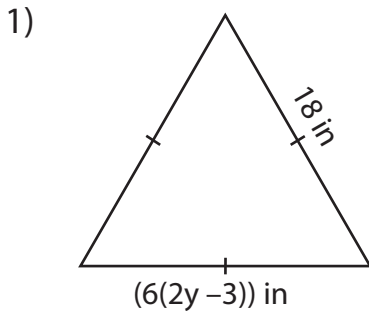
Name : _____

Answer Key

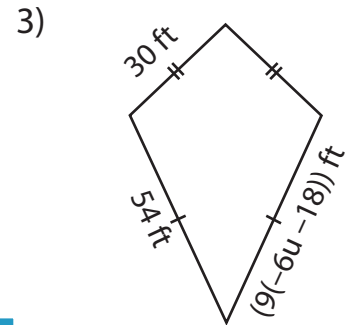
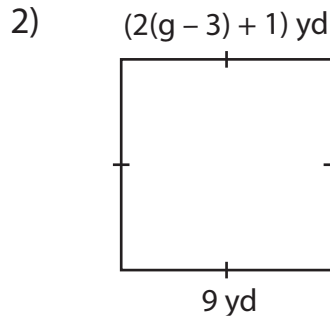
Multi-Step Equations: Shapes

Type 1: S2

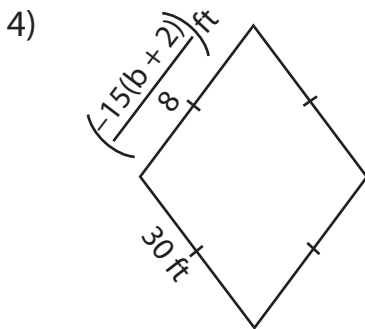
Find the unknown value given in each shape.



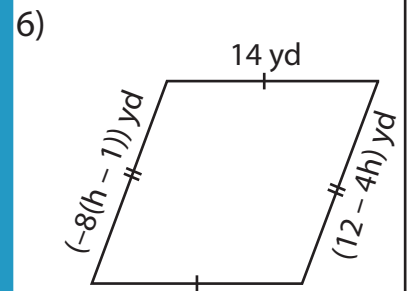
$y = \underline{\quad 3 \quad}$



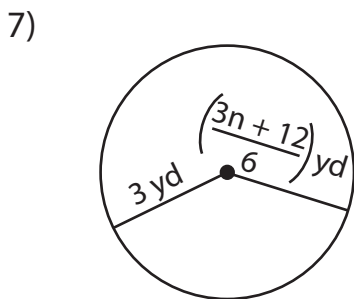
$u = \underline{\quad -4 \quad}$



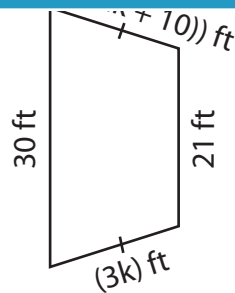
$b = \underline{\quad -18 \quad}$



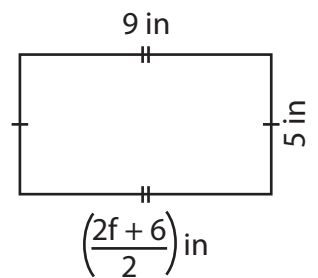
$h = \underline{\quad -1 \quad}$



$n = \underline{\quad 2 \quad}$



$k = \underline{\quad 5 \quad}$



$f = \underline{\quad 6 \quad}$

PREVIEW

Gain complete access to the largest collection of worksheets in all subjects!

Members, please log in to download this worksheet.

Not a member? Please sign up to gain complete access.

www.mathworksheets4kids.com